

SSC CGL (Tier - 1) Online Exam Paper - 2016 "held on 1 September 2016" Morning Shift (Reasoning)

EXAM DATE : 1-September-2016

EXAM START TIME : 10:00:00

EXAM NAME : SSC Examination 2016

1. Select the related word/letters/number from the given alternatives.

Psychology : Human Being :: Ornithology : ?

- 1) Birds
- 2) Volcanoes
- 3) Insects
- 4) Reptiles

2. Select the related word/letters/number from the given alternatives.

EGIK : FHJL :: MOQS : ?

- 1) LNOQ
- 2) NPRT
- 3) KMOQ
- 4) NRPT

3. Select the related word/letters/number from the given alternatives.

147 : 741 :: 869 : ?

- 1) 896
- 2) 968
- 3) 689
- 4) 986

4. For the following questions

Find the odd word/letters/number pair from the given alternatives.

- 1) Herb
- 2) Flower
- 3) Tree
- 4) Shrub

5. For the following questions

Find the odd word/letters/number pair from the given alternatives.

- 1) JKLM
- 2) NOPQ
- 3) RSTU
- 4) VWXZ

6. For the following questions

Find the odd word/letters/number pair from the given alternatives.

- 1) (85, 136)
- 2) (34, 85)
- 3) (102, 153)
- 4) (63, 162)

7. Arrange the following words as per order in the dictionary

1. Organ
 2. Origin
 3. Orient
 4. Organic
 5. Organise
- 1) 1, 5, 3, 4, 2
 - 2) 1, 5, 4, 2, 3
 - 3) 1, 4, 5, 3, 2
 - 4) 1, 4, 5, 2, 3

8. Which one set of letters when sequentially placed at the gaps in the given letter series shall complete it?

sr_tr_srs_r_srst_

- 1) ttssrr
- 2) tsrtsr
- 3) strtrs
- 4) tstttr

9. Find the missing number in the following series:

43, 172, 86, 344, ?

- 1) 172
- 2) 258
- 3) 129
- 4) 430

10. 'A' is the sister of 'B'. 'B' is married to 'D'. 'B' and 'D' have a daughter 'G'. How is 'G' related to 'A'?

- 1) Sister
- 2) Daughter
- 3) Niece
- 4) Cousin

11. Anil is as much younger to Vivek as he is older to Tarun. If the total of the ages of Vivek and Tarun is 48 years, how old is Anil?

- 1) 26
- 2) 33
- 3) 24
- 4) 18

12. From the given alternative words, select the word which cannot be formed using the letters of the given word:

CHRONOLOGICAL

- 1) CALL
- 2) LOGIC
- 3) CALICO
- 4) ANALOGY

13. If HOUSE is written as FQSUC , then how can CHAIR be written in that code?

- 1) DIBJS
- 2) SBJID
- 3) SHBGD
- 4) AJYKP

14. If P denotes \div , Q denotes \times , R denotes $+$ and S denotes $-$ then what is the value of 18Q12P4R5S6

- 1) 64
- 2) 53
- 3) 81
- 4) 24

15. If $4 + 3 = 25$, and $8 + 4 = 80$, then, $3 + 2 = ?$

- 1) 15
- 2) 10
- 3) 13
- 4) 12

16. Select the missing numbers from the given alternatives

8	32	4
7	?	5
2	6	3

- 1) 30
- 2) 35
- 3) 20
- 4) 25

17. Ramesh starts his journey by walking 2 kilometres towards North. Then he takes a right turn and walks 1 kilometre. Again takes a right turn and walks 2 kilometre. Now which direction is he facing?

- 1) East
- 2) West
- 3) South
- 4) North

18. Consider the given statement/s to be true and decide which of the given conclusions/assumptions can definitely be drawn from the given statement.

Statement: Irregularity is a cause for failure in exams. Some regular students fail in the examinations.

Conclusions:

- I. All failed students are regular.
 - II. All successful students are not regular.
- 1) Only conclusion I follows
 - 2) Only conclusion II follows
 - 3) Both conclusion I and conclusion II follow
 - 4) Neither conclusion I nor conclusion II follows

19. How many triangles are there in the given figure?

SSC Constable (GD) Exam Study Kit



- ▶ 100% Written Exam Syllabus
- ▶ 700+ Pages, Printed Books
- ▶ 1500 MCQ, 8 Books
- ▶ Practice Question Papers
- ▶ 1 Year Current Affairs

50% OFF
~~₹ 3,200/-~~
₹ 1,599/-



for Exam Help Call Us at: +91 8800734161

IAS EXAM PORTAL

What you will get:

- 100% Syllabus Covered
- 8 Booklets
- 700+ Pages
- Five Practice Papers
- One Year Current Affairs
- Current Affairs for Exam
- Guidance & Support from Our Experts

Price of the Kit:

~~Rs. 3,200~~

Rs. 1,599/-
(Limited time Offer)



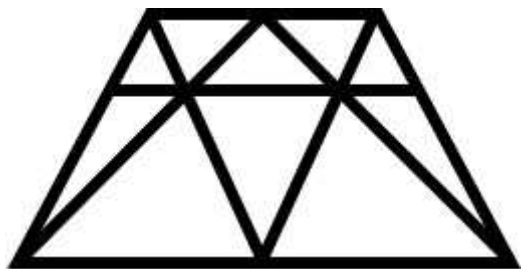
Net Banking

Order Online (100% Safe)

[Click here for Other Payment Options \(Cash/NEFT/etc\)](#)

FOR MORE DETAILS CLICK HERE



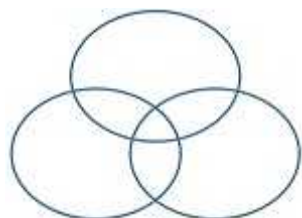


- 1) 18
- 2) 19
- 3) 20
- 4) 21

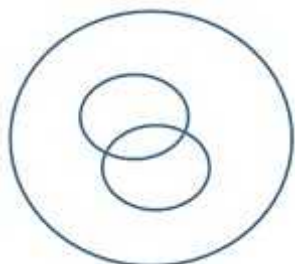
20. Which one of the following figures represents the following relationship:

Birds, Parrots, Bats

1.



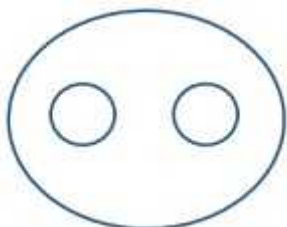
2.



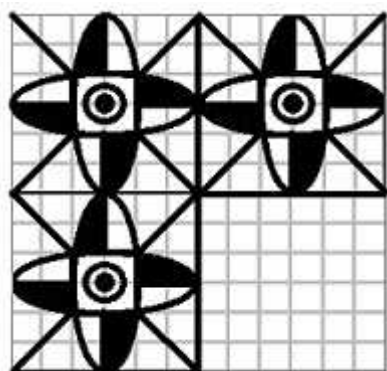
3.



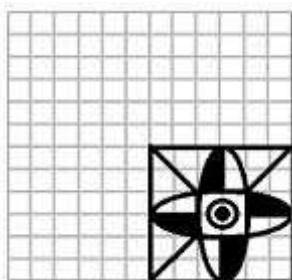
4.



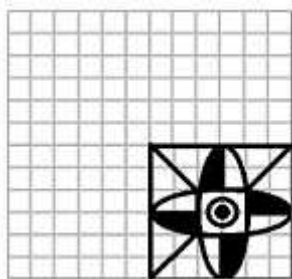
21. Which answer figure will complete the pattern in the question figure?



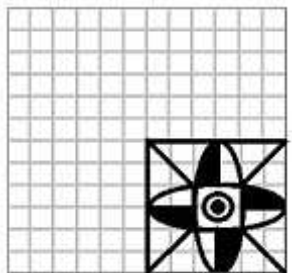
1.



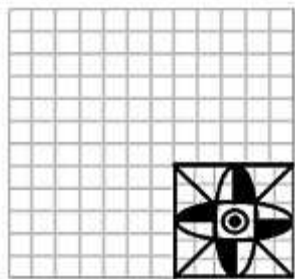
2.



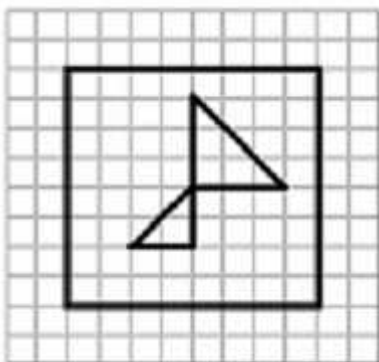
3.



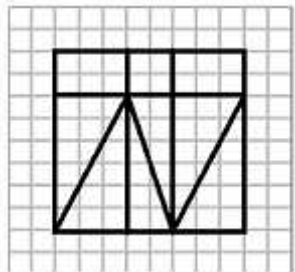
4.



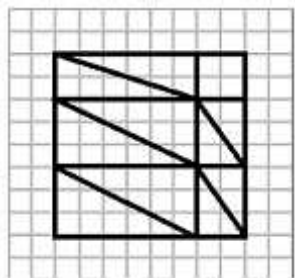
22. From the given answer figures, select the one in which the question figure is hidden/embedded



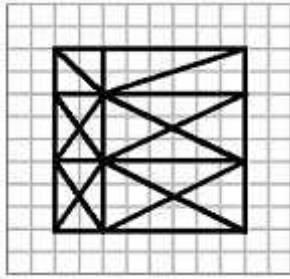
1.



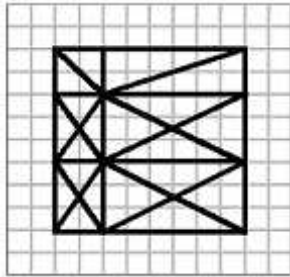
2.



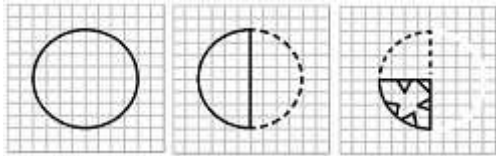
3.



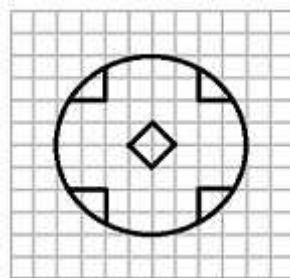
4.



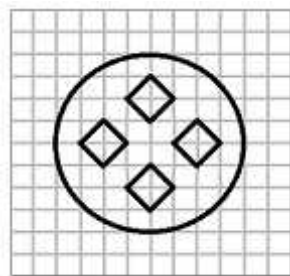
23. A piece of paper is folded and cut as shown below in the question figures. From the given answer figures, indicate how it will appear when opened.



1.



2.



3.

SSC CGL Tier-2 Study Kit



- 100% Syllabus Covered
- 3 Books, 750+ Pages
- 2000+ MCQs
- 5 Mock Practice Tests (PDF Copy)
- 1 year Current Affairs (PDF Copy)



~~₹ 6,000/-~~
₹ 1,999/-

>>>>  [Click Here for More Details](#)

[CLICK HERE](#)

 SSCPORTAL.IN

What you will get:

- 100% Syllabus Covered
- 3 Booklets
- 750+ Pages
- 2,000+ MCQs
- 5 Practice Papers also provided
- One Year Current Affairs (PDF Copy)
- Guidance & Support from Our Experts

Price of the Kit:

~~Rs. 6,000~~

Rs. 1,999/-
(Limited time Offer)

 [Buy Online](#)

Net [Banking](#)

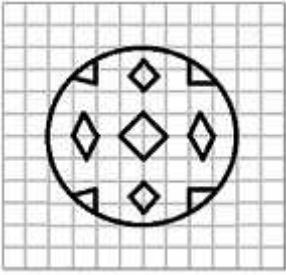
[CLICK HERE FOR MORE DETAILS](#)

Order Online (100% Safe)

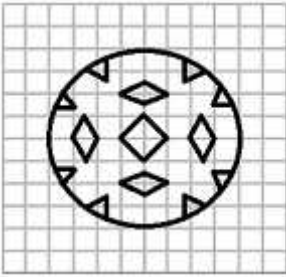
[Click here for Other Payment Options \(Cash/NEFT/etc\)](#)

**50%
OFF**

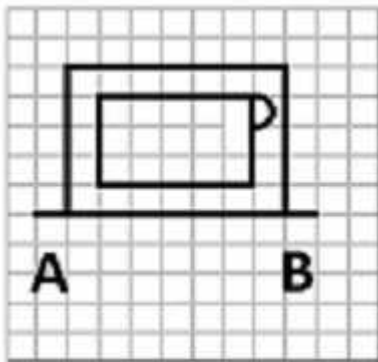
[CLICK HERE](#)



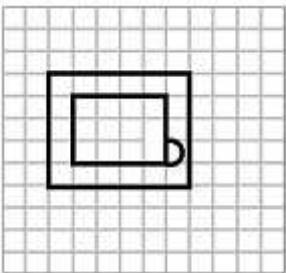
4.



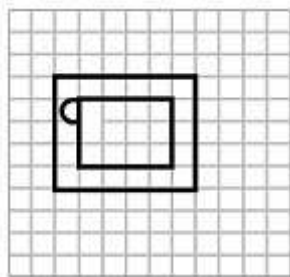
24. If a mirror is placed on the line AB, then which of the answer figures is the right image of the given figure?



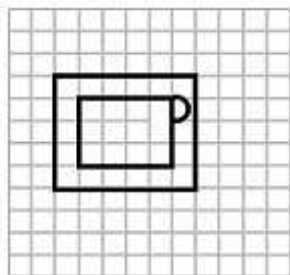
1.



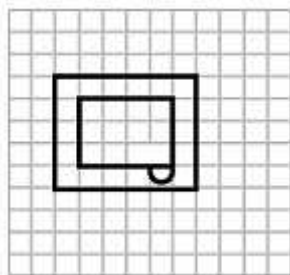
2.



3.



4.



25. In the question, a word is represented by only one set of numbers as given in any one of the alternatives. The sets of numbers given in the alternatives are represented by two classes of alphabets as in two matrices given below. The columns and rows of Matrix I are numbered from 0 to 4 and that of Matrix II are numbered from 5 to 9. A letter from these matrices can be represented first by its row and next by its column, e.g., 'B' can be represented by 00, 13 etc., and 'A' can be represented by 55, 69 etc.

Similarly you have to identify the set for the word 'GIRL'

MATRIX I

	0	1	2	3	4
0	B	N	G	L	D
1	G	L	D	B	N
2	D	B	N	G	L
3	N	G	L	D	B
4	L	D	B	N	G

MATRIX II

	5	6	7	8	9
5	A	I	K	O	R
6	I	K	O	R	A
7	K	O	R	A	I
8	O	R	A	I	K
9	R	A	I	K	O

- 1) 02, 56, 97, 24
- 2) 31, 79, 68, 42
- 3) 23, 97, 77, 11
- 4) 11, 88, 95, 23

:: Answers ::

1. (1) 2. (2) 3. (2) 4. (2) 5. (4) 6. (4) 7. (3) 8. (4) 9. (1) 10. (3) 11. (3) 12. (4) 13. (4) 14. (2) 15. (3) 16. (2) 17. (3) 18. (4) 19. (3) 20. (3) 21. (4) 22. (3) 23. (4) 24. (1) 25. (3)



SSC EXAMS PRINTED STUDY NOTES

Study Material for SSC CGL (Tier-1) Examination	English	CLICK HERE
Study Kit for SSC CGL (Tier-2) Exam	English	CLICK HERE
Study Kit for SSC CHSL (10+2) Examination	English	CLICK HERE
Study Kit for SSC Stenographers (Grade 'C' & 'D')	English	CLICK HERE
Study Kit for Multitasking (Non-Technical) - MTS	English	CLICK HERE
Study Kit for SSC Constables (GD) Exam	English	CLICK HERE
Study Kit For SSC Sub-Inspectors in Delhi Police, CAPFs, CISF	English	CLICK HERE
Study Kit for SSC Junior Engineer Exam (Paper-1)	English	CLICK HERE
IAS EXAMS STUDY MATERIALS		
Study Kit for IAS (Pre) GENERAL STUDIES Paper-1 (GS)	English	CLICK HERE
Study Kit for IAS (Pre) CSAT Paper-2(Aptitude)	English	CLICK HERE
सामान्य अध्ययन (GS) प्रारंभिक परीक्षा (Pre) पेपर-1	हिन्दी	CLICK HERE
आई. ए. एस. (सी-सैट) प्रारंभिक परीक्षा पेपर -2	हिन्दी	CLICK HERE
Gist of NCERT Study Kit For UPSC Exams	English	CLICK HERE
यूपीएससी परीक्षा के लिए एनसीईआरटी अध्ययन सामग्री	हिन्दी	CLICK HERE