

SSC CGL (Tier - 1) Online Exam Paper - 2016 "held on 2 September 2016" Morning Shift (Reasoning)

EXAM DATE : 2-September-2016

EXAM START TIME : 10:00:00

EXAM NAME : SSC Examination 2016

Question 1. Select the related word/letters/numbers from the given alternatives:

Owl : Hoots :: Hen : ?

Options:

- 1) Chirps
- 2) Clucks
- 3) Coos
- 4) Cackles

Correct Answer: Clucks

Question 2. Select the related word/letters/numbers from the given alternatives:

AKU : ? :: CMW : DNX

Options:

- 1) BGL
- 2) BLQ

3) BGQ

4) BLV

Correct Answer: BLV

Question 3. Select the related word/letters/numbers from the given alternatives:

5 : 100 :: 7 : ?

Options:

1) 49

2) 196

3) 91

4) 135

Correct Answer: 196

Question 4. For the following questions

Find the odd word/letters/number from the given alternatives.

Options:

1) Time

2) Skill

3) Interest

4) Knowledge

Correct Answer: Time

Question 5. For the following questions

Find the odd word/letters/number from the given alternatives.

Options:

1) CPA

2) REB

3) QUD

4) AOT

Correct Answer: CPA

Question 6. For the following questions

Find the odd word/letters/number pair from the given alternatives.

Options:

1) 15 - 21

2) 32 - 41

3) 22 - 27

4) 31 - 35

Correct Answer: 15 - 21

Question 7. Arrange the following words as per order in the dictionary and then choose the one which comes last.

1. Qualify 2. Quarter 3. Quarrel 4. Quaver

Options:

1) Qualify

2) Quarter

3) Quarrel

4) Quaver

Correct Answer: Quaver

Question 8. A series is given, with one term missing. Choose the correct alternative from the given ones that will complete the series.

DF, GJ, KM, NQ, RT, ?

Options:

1) EI

2) UX

3) UV

4) XY

Correct Answer: UX

Question 9. A series is given, with one term missing. Choose the correct alternative from the given ones that will complete the series.

2, 7, 14, 23, 34, ?

Options:

1) 47

2) 39

3) 42

4) 46

Correct Answer: 47

Question 10. A and B are standing at place "P". They start moving in the opposite directions at the speed of 5 Kmph and 4 Kmph respectively. What will be the distance between them after 3 hours

Options:

1) 3 kms

2) 21 kms

3) 18 kms

4) 27 kms

Correct Answer: 27 kms

Question 11.If Usha is taller than Nisha; Nisha is taller than Asha; Alka is taller than Usha. Harsha is shorter than Asha; then who among them is the tallest?

Options:

1) Usha

2) Alka

3) Nisha

4) Asha

Correct Answer: Alka

Question 12.From the given alternative words, select the word which cannot be formed using the letters of the given word:

DHARAMSALA

Options:

1) MASALA

2) ARAMANA

3) RAMA

4) SAHARA

Correct Answer: ARAMANA

Question 13.If in a code GONE is written as ILPB then how may CRIB be written in that code?

Options:

1) EUKY

2) EKUY

3) EYUK

4) EOKY

Correct Answer: EOKY

Question 14.

Options:

1) 295

2) 290

3) 209

4) 105

Correct Answer: 295

Question 15.If $12 \times 16 = 188$ and

$14 \times 18 = 248$,

then find the value of

$16 \times 20 = ?$

Options:

1) 320

2) 360

3) 316

4) 318

Correct Answer: 316

Question 16.Find the missing number from the given alternatives.

Options:

1) 60

2) 62

3) 64

4) 66

Correct Answer: 64

Question 17.One morning, Raju walked towards the sun. After some time he turned left and again to his left. Which direction is he facing?

SSC Constable (GD) Exam Study Kit



- ▶ 100% Written Exam Syllabus
- ▶ 700+ Pages, Printed Books
- ▶ 1500 MCQ, 8 Books
- ▶ Practice Question Papers
- ▶ 1 Year Current Affairs

50% OFF
~~₹ 3,200/-~~
₹ 1,599/-



for Exam Help Call Us at: **+91 8800734161**

IAS EXAM PORTAL

What you will get:

- 100% Syllabus Covered
- 8 Booklets
- 700+ Pages
- Five Practice Papers
- One Year Current Affairs
- Current Affairs for Exam
- Guidance & Support from Our Experts

Price of the Kit:

~~Rs. 3,200~~

Rs. 1,599/-
(Limited time Offer)



Net Banking

Order Online (100% Safe)

[Click here for Other Payment Options \(Cash/NEFT/etc\)](#)

FOR MORE DETAILS CLICK HERE



Options:

- 1) North
- 2) South
- 3) East
- 4) West

Correct Answer: West

Question 18. One or two statements are given followed by two conclusions/assumptions, I and II. You have to consider the statement to be true, even if it seems to be at variance from commonly known facts. You are to decide which of the given conclusions/assumptions can definitely be drawn from the given statement. Indicate your answer.

Statements: 1. If people are intelligent, they should be creative.

Assumptions: I. Creativity and intelligence are related. II. Creative people are intelligent.

Options:

- 1) Only conclusion I follows
- 2) Only conclusion II follows
- 3) Both conclusion I and conclusion II follow
- 4) Neither conclusion I nor conclusion II follows

Correct Answer: Both conclusion I and conclusion II follow

Candidate Answer: [NOT ANSWERED]

Question 19. How many rectangles are there in the given figure?

Options:

- 1) 8
- 2) 15
- 3) 24
- 4) 30

Correct Answer: 30

Question 20. In a village some of the goldsmiths are literates. Which diagram shows literate goldsmiths?

Options:

1)

2)

3)

4)

Correct Answer:

Question 21. Which answer figure will complete the pattern in the question figure?

Options:

1)

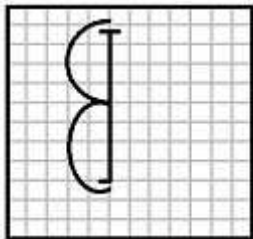
2)

3)

4)

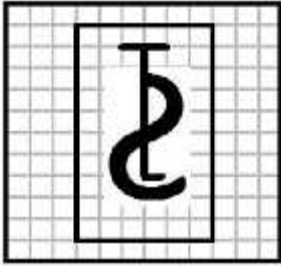
Correct Answer:

Question 22. From the given answer figures, select the one in which the question figure is hidden/embedded.

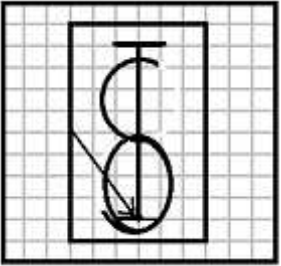


Options:


1)



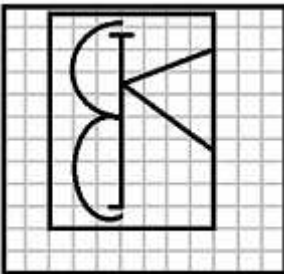
2)



3)



4)



Study Kit for SSC Stenographers (Grade 'C' & 'D') Examination (Paper - 1)



- Medium: English
- 100% Syllabus Covered
- 3000 + MCQs
- 700+ Pages

**SPECIAL
OFFER**

Only
~~MRP ₹ 3000/-~~
Offer ₹ 1499/-

[Click Here for More Details](#)

What you will get:

- 100% Syllabus Covered
- 6 Booklets
- 700+ Pages
- 3000+ MCQs
- Five Practice Papers
- One Year Current Affairs
- Guidance & Support from Our Experts

Price of the Kit:

~~Rs. 3,000~~

Rs. 1,499/-
(Limited time Offer)



Net Banking

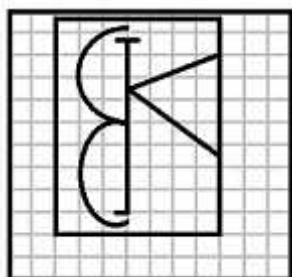
[FOR MORE DETAILS CLICK HERE](#)

[Order Online \(100% Safe\)](#)

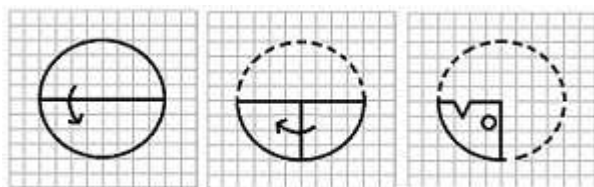
[Click here for Other Payment Options \(Cash/NEFT/etc\)](#)

**50%
OFF**

Correct Answer:

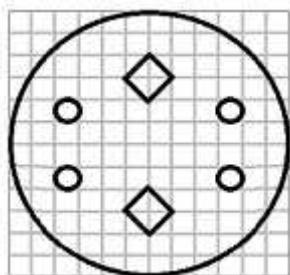


Question 23. A piece of paper is folded and cut as shown below in the question figures. From the given answer figures, indicate how it will appear when opened.

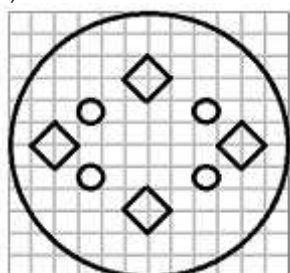


Options:

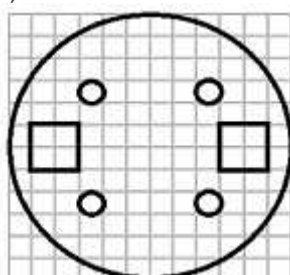
1)



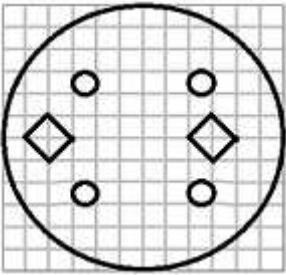
2)



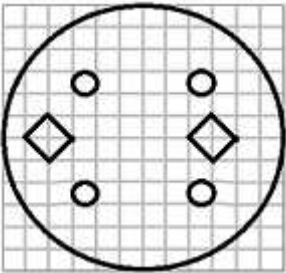
3)



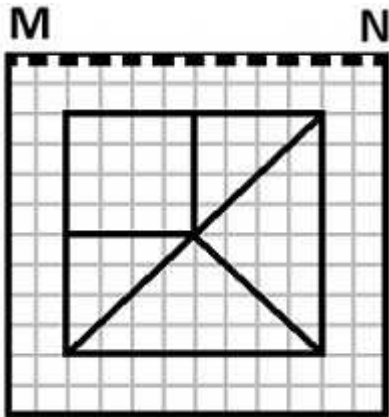
4)



Correct Answer:

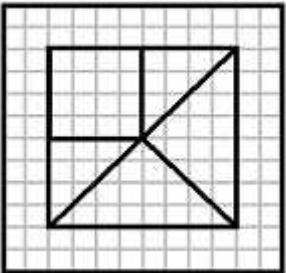


Question 24. If a mirror is placed on the line MN, then which of the answer figures is the right image of the given figure?

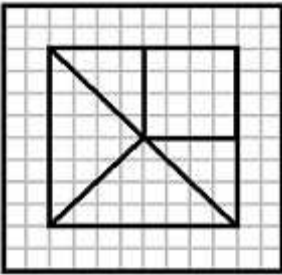


Options:

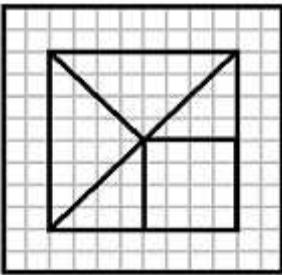
1)



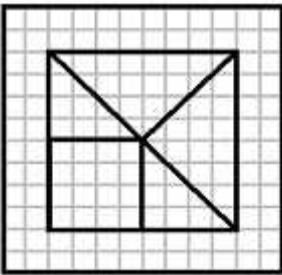
2)



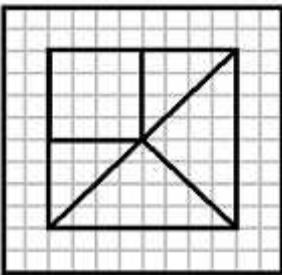
3)



4)



Correct Answer:



Question 25. In this question, the sets of numbers given in the alternatives are represented. The columns and rows of Matrix I are numbered from 0 to 4 and that of Matrix II are numbered from 5 to 9. A letter from these matrices can be represented first by its row and next by its column, e.g., O can be represented by 03, 11, etc., and 'F' can be represented by 55, 68, etc. Similarly you have to identify the set for the word '**BEAD**'

MATRIX I

	0	1	2	3	4
0	I	E	A	O	U
1	A	O	U	I	E
2	E	I	O	U	A
3	O	U	E	A	I
4	U	A	I	E	O

MATRIX II

	5	6	7	8	9
5	F	D	B	G	H
6	B	G	H	F	D
7	D	F	G	H	B
8	G	H	D	B	F
9	H	B	F	G	D

Options:

- 1) 97, 32, 14, 56
- 2) 88, 41, 20, 57
- 3) 57, 32, 41, 87
- 4) 75, 14, 20, 57

Correct Answer: 57, 32, 41, 87



SSC EXAMS PRINTED STUDY NOTES

Study Material for SSC CGL (Tier-1) Examination	English	CLICK HERE
Study Kit for SSC CGL (Tier-2) Exam	English	CLICK HERE
Study Kit for SSC CHSL (10+2) Examination	English	CLICK HERE
Study Kit for SSC Stenographers (Grade 'C' & 'D')	English	CLICK HERE
Study Kit for Multitasking (Non-Technical) - MTS	English	CLICK HERE
Study Kit for SSC Constables (GD) Exam	English	CLICK HERE
Study Kit For SSC Sub-Inspectors in Delhi Police, CAPFs, CISF	English	CLICK HERE
Study Kit for SSC Junior Engineer Exam (Paper-1)	English	CLICK HERE
IAS EXAMS STUDY MATERIALS		
Study Kit for IAS (Pre) GENERAL STUDIES Paper-1 (GS)	English	CLICK HERE
Study Kit for IAS (Pre) CSAT Paper-2(Aptitude)	English	CLICK HERE
सामान्य अध्ययन (GS) प्रारंभिक परीक्षा (Pre) पेपर-1	हिन्दी	CLICK HERE
आई. ए. एस. (सी-सैट) प्रारंभिक परीक्षा पेपर -2	हिन्दी	CLICK HERE
Gist of NCERT Study Kit For UPSC Exams	English	CLICK HERE
यूपीएससी परीक्षा के लिए एनसीईआरटी अध्ययन सामग्री	हिन्दी	CLICK HERE