

---

## SSC CGL (Tier - 1) Online Exam Paper - 2016 "held on 7 September 2016" Morning Shift (Reasoning)

---

**EXAM DATE : 7-September-2016**

**EXAM START TIME : 10:00:00**

**EXAM NAME : SSC Examination 2016**

**Question 1. Select the related word/letters/number from the given alternatives.**

**Bacteria : Microscope :: Moon : ?**

**Options:**

- 1) Night
- 2) Earth
- 3) Satellite
- 4) Telescope

**Correct Answer: Telescope**

**Question 2. Select the related word/letters/number from the given alternatives.**

**LNPR : TVXZ : NPRT : ?**

**Options:**

- 1) FHJL
- 2) FLJH
- 3) HFLJ
- 4) JLHF

**Correct Answer:** FHJL

**Question 3.** Select the related word/letters/number from the given alternatives.

27 : 125 : 64 : ?

**Options:**

- 1) 517
- 2) 162
- 3) 216
- 4) 273

**Correct Answer:** 216

**Question 4.**

For the following questions

Find the odd word/letters/number pair from the given alternatives.

**Options:**

- 1) Novel
- 2) Paper
- 3) Pencil
- 4) Pen

**Correct Answer:** Novel

**Question 5.**

For the following questions

Find the odd word/letters/number pair from the given alternatives.

**Options:**

- 1) acDD
- 2) egHH
- 3) ikLL
- 4) QStt

**Correct Answer:** QStt

**Question 6.**

For the following questions

Find the odd word/letters/number pair from the given alternatives.

**Options:**

- 1) 65 - 90
- 2) 73 - 97
- 3) 112 - 137
- 4) 162 - 187

**Correct Answer:** 73 - 97

**Question 7.** Arrange the following words as per order in the dictionary

**a. Guarantee b. Group c. Grotesque d. Guard e. Groan**

**Options:**

- 1) a, c, e, b, d
- 2) b, e, a, d, c
- 3) b, c, e, a, d
- 4) e, c, b, a, d

**Correct Answer:** e, c, b, a, d

**Question 8.** Which one set of letters when sequentially placed at the gaps in the given letter series shall complete it?

xy\_kx\_zk\_yzk xyz\_\_

**Options:**

- 1) zyxx
- 2) zyxxz
- 3) zkxyk
- 4) zxyxx

**Correct Answer:** zyxx

**Question 9.** Find the missing number in the series:

219, 211, 204, 198, ?, 189

**Options:**

- 1) 189
- 2) 192
- 3) 193
- 4) 196

**Correct Answer:** 193

**Question 10.** If M is the sister of Z, Z is the wife of P and P is the son of A, how Z relates to A?

**Options:**

- 1) Daughter-in-law
- 2) Daughter
- 3) Wife
- 4) Mother

**Correct Answer:** Daughter-in-law

**Question 11.** The sum of ages of 4 children born at intervals of 4 years each is 60. What is the age of the youngest child?

**Options:**

- 1) 7
- 2) 9
- 3) 10
- 4) 12

**Correct Answer:** 9

**Question 12.** From the given alternative words, select the word which cannot be formed using the letters of the given word:

**Options:**

- 1) OINTMENT
- 2) MENTOR
- 3) VENOM
- 4) TRIM

**Correct Answer:** OINTMENT

**Question 13.** In a certain code CAMEL is written as MFNBD. How shall TIGER be written in that code?

**Options:**

- 1) SFUJH
- 2) SFHJU
- 3) SFJUH
- 4) SHFJU

**Correct Answer:** SFHJU

**Question 14.** If  $x$  stands for  $-$ ,  $+$  means  $\times$ ,  $\div$  means  $+$  and  $-$  means  $\div$ , then what is the value of the given expression?

$$175 - 25 \div 5 + 2 \times 3 + 10 = ?$$

**Options:**

- 1) 77
- 2) 160
- 3) 240
- 4) 2370

**Correct Answer:** 77

**Question 15.** If  $4 * 2 = 3$

and  $8 * 4 = 3$ ,

then  $21 * 7 = ?$

**Options:**

- 1) 4
- 2) 3

- 3) 8
- 4) 16

**Correct Answer:** 4

**Question 16.**Select the missing numbers from the given alternatives

17	11	19
12	13	16
25	4	?

**Options:**

- 1) 9
- 2) 16
- 3) 25
- 4) 36

**Correct Answer:** 9

**Question 17.**A man walks 5 kilometre towards South and then turns to the right. After walking 3 kilometre, he turns to the left and walks 5 kilometre. Now in which direction is he from the starting point?

**Options:**

- 1) West
- 2) South
- 3) North-East
- 4) South-West

**Correct Answer:** South-West

**Question 18.**Consider the given statement/s to be true and decide which of the given conclusions/assumptions can definitely be drawn from the given statement.

**Statements:** Life means stresses and strains.

**Stresses and strains have an adverse effect on life.**

**Conclusions:** I. Life is not worth living.

II. One should avoid stresses and strains in life.

**Options:**

- 1) Only conclusion I follows
- 2) Only conclusion II follows
- 3) Both conclusion I and conclusion II follow
- 4) Neither conclusion I nor conclusion II follows

**Correct Answer:** Only conclusion II follows

# SSC CGL Tier-1 Printed Study Kit



- 100% Syllabus Covered
- 12 Books , 1300+ Pages
- 5600+ MCQs
- 08 Year Solved Papers & Mock Tests (PDF Copy)
- 1 year Current Affairs (PDF Copy)

**50% OFF**

~~₹ 6,000/-~~  
**₹ 2,999/-**

**FREE SHIPPING** 

for Exam Help Call Us at: +91 8800734161

 **SSCPORTAL.IN**

## What you will get:

- 100% Syllabus Covered
- 12 Books
- 1300+ Pages
- 5600+ MCQs
- 8 Year Solved Papers (PDF Copy)
- Five Practice Papers (PDF Copy)
- One Year Current Affairs (PDF Copy)
- Guidance & Support from Our Experts

Price of the Kit:

~~Rs. 6,000~~

**Rs. 2,999/-**  
(Limited time Offer)

 **Buy Online**

**Net Banking**

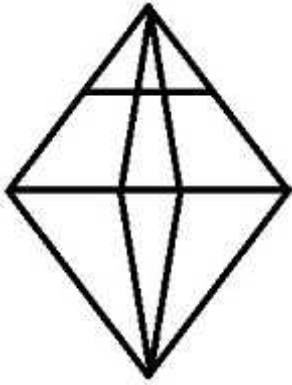
**Order Online (100% Safe)**

[Click here for Other Payment Options \(Cash/NEFT/etc\)](#)

**FOR MORE DETAILS CLICK HERE**

**50% OFF**

Question 19. How many triangles are there in this geometric figure?



Options:

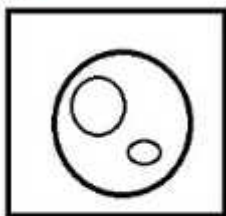
- 1) 12
- 2) 16
- 3) 18
- 4) 20

Correct Answer: 18

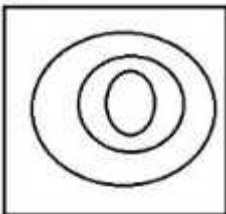
Question 20. Which of the answer figures best indicates the relationship between:  
Doctors, Nurses, Hospital

Options:

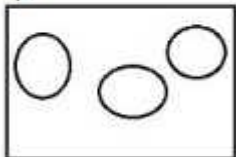
1)



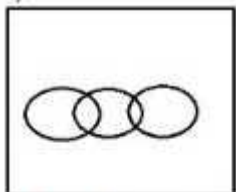
2)



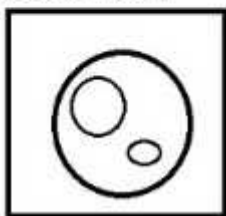
3)



4)

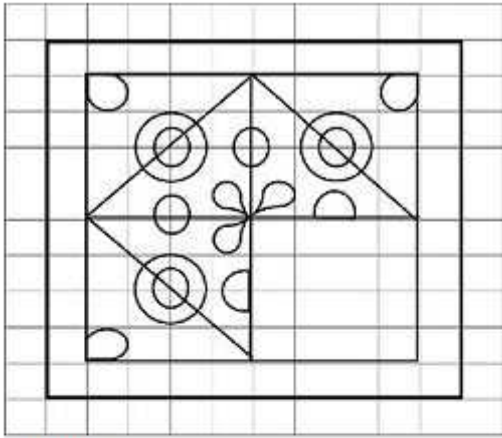


Correct Answer:



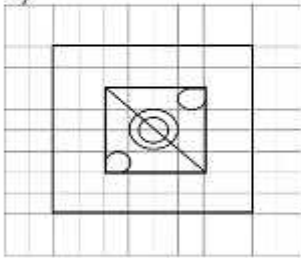
Question 21. Which answer figure will complete the pattern in the question figure?



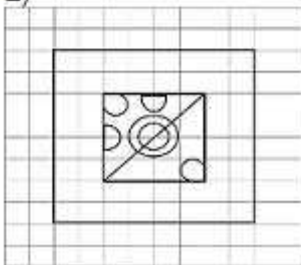


Options:

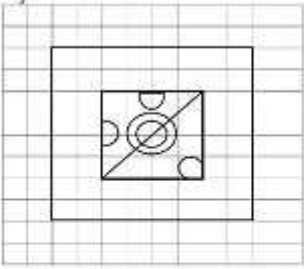
1)



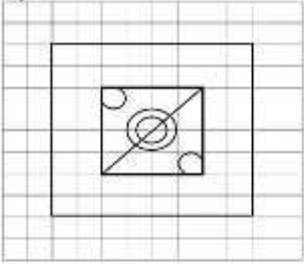
2)



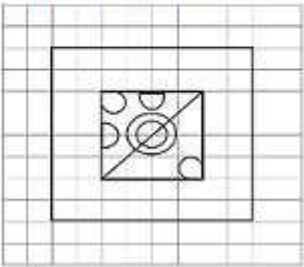
3)



4)



**Correct Answer:**

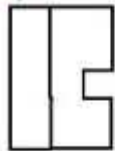


Question 22. From the given answer figures, select the one in which the question figure is hidden/embedded

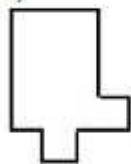


Options:

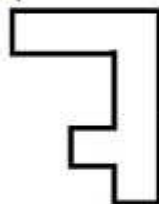
1)



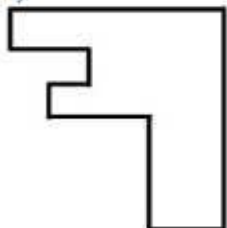
2)



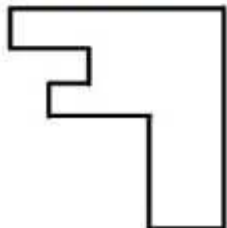
3)



4)



Correct Answer:



Question 23. A piece of paper is folded and cut as shown below in the question figures. From the given answer figures, indicate how it will appear when opened.

# SSC Constable (GD) Exam Study Kit



- ▶ 100% Written Exam Syllabus
- ▶ 700+ Pages, Printed Books
- ▶ 1500 MCQ, 8 Books
- ▶ Practice Question Papers
- ▶ 1 Year Current Affairs

**50% OFF**  
~~₹ 3,200/-~~  
**₹ 1,599/-**



for Exam Help Call Us at: +91 8800734161

IAS EXAM PORTAL

## What you will get:

- 100% Syllabus Covered
- 8 Booklets
- 700+ Pages
- Five Practice Papers
- One Year Current Affairs
- Current Affairs for Exam
- Guidance & Support from Our Experts

Price of the Kit:

~~Rs. 3,200~~

**Rs. 1,599/-**  
(Limited time Offer)



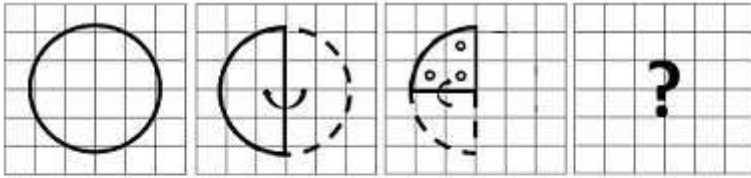
Net Banking

**Order Online (100% Safe)**

[Click here for Other Payment Options \(Cash/NEFT/etc\)](#)

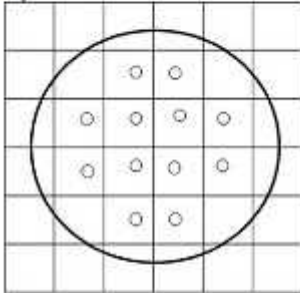
**FOR MORE DETAILS CLICK HERE**



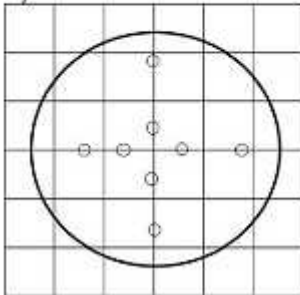


Options:

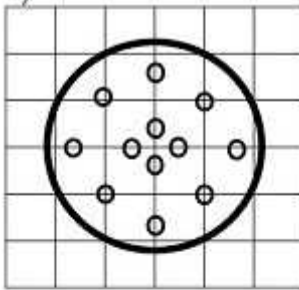
1)



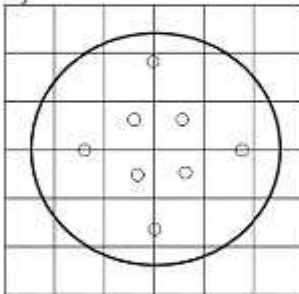
2)



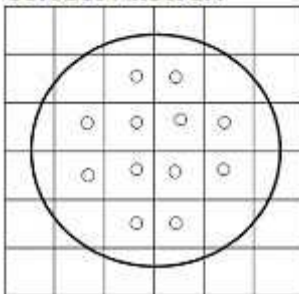
3)



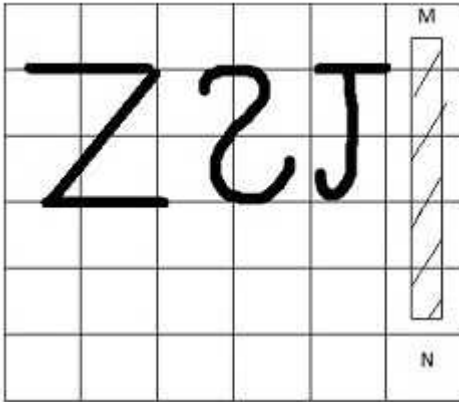
4)



**Correct Answer:**

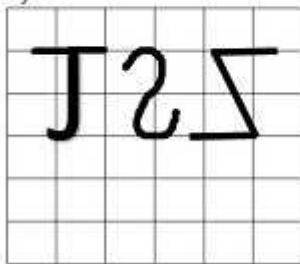


Question 24. If a mirror is placed on the line MN, then which of the answer figures is the right image of the given figure?




Options:


1)



2)




3)



4)



Correct Answer:



Question 25. In the question, a word is represented by only one set of numbers as given in any one of the alternatives. The sets of numbers given in the alternatives are represented by two classes of alphabets as in two matrices given below. The columns and rows of Matrix I are numbered from 0 to 4 and that of Matrix II are numbered from 5 to 9. A letter from these matrices can be represented first by its row and next by its column, e.g., 'G' can be represented by 01 and 'P' can be represented by 10, 44, etc. Similarly you have to identify the set for the word 'BARK'

	0	1	2	3	4		5	6	7	8	9
0	K	G	E	A	S	5	A	H	U	W	N
1	P	V	H	R	Y	6	Y	R	B	T	V
2	N	U	N	R	K	7	O	I	H	B	Q
3	W	S	B	O	J	8	V	O	E	I	S
4	T	U	A	I	P	9	E	T	K	W	P

Options:

- 1) 32, 55, 69, 24
- 2) 32, 03, 66, 57



3) 67, 42, 66, 00

4) 23, 30, 66, 97

**Correct Answer:** 67, 42, 66, 00



# SSC EXAMS PRINTED STUDY NOTES

<a href="#">Study Material for SSC CGL (Tier-1) Examination</a>	<a href="#">English</a>	<a href="#">CLICK HERE</a>
<a href="#">Study Kit for SSC CGL (Tier-2) Exam</a>	<a href="#">English</a>	<a href="#">CLICK HERE</a>
<a href="#">Study Kit for SSC CHSL (10+2) Examination</a>	<a href="#">English</a>	<a href="#">CLICK HERE</a>
<a href="#">Study Kit for SSC Stenographers (Grade 'C' &amp; 'D')</a>	<a href="#">English</a>	<a href="#">CLICK HERE</a>
<a href="#">Study Kit for Multitasking (Non-Technical) - MTS</a>	<a href="#">English</a>	<a href="#">CLICK HERE</a>
<a href="#">Study Kit for SSC Constables (GD) Exam</a>	<a href="#">English</a>	<a href="#">CLICK HERE</a>
<a href="#">Study Kit For SSC Sub-Inspectors in Delhi Police, CAPFs, CISF</a>	<a href="#">English</a>	<a href="#">CLICK HERE</a>
<a href="#">Study Kit for SSC Junior Engineer Exam (Paper-1)</a>	<a href="#">English</a>	<a href="#">CLICK HERE</a>
<b>IAS EXAMS STUDY MATERIALS</b>		
<a href="#">Study Kit for IAS (Pre) GENERAL STUDIES Paper-1 (GS)</a>	<a href="#">English</a>	<a href="#">CLICK HERE</a>
<a href="#">Study Kit for IAS (Pre) CSAT Paper-2(Aptitude)</a>	<a href="#">English</a>	<a href="#">CLICK HERE</a>
<a href="#">सामान्य अध्ययन (GS) प्रारंभिक परीक्षा (Pre) पेपर-1</a>	<a href="#">हिन्दी</a>	<a href="#">CLICK HERE</a>
<a href="#">आई. ए. एस. (सी-सैट) प्रारंभिक परीक्षा पेपर -2</a>	<a href="#">हिन्दी</a>	<a href="#">CLICK HERE</a>
<a href="#">Gist of NCERT Study Kit For UPSC Exams</a>	<a href="#">English</a>	<a href="#">CLICK HERE</a>
<a href="#">यूपीएससी परीक्षा के लिए एनसीईआरटी अध्ययन सामग्री</a>	<a href="#">हिन्दी</a>	<a href="#">CLICK HERE</a>