

---

## SSC CGL (Tier - 1) Online Exam Paper - 2016 "held on 8 September 2016" Evening Shift (Reasoning)

---

**EXAM DATE :** 8-September-2016

**EXAM START TIME :** 16:15:00

**EXAM NAME :** SSC Examination 2016

**Question 1.** Select the related word/letters/numbers from the given alternatives:

**Air:Bird::Water: ?**

**Options:**

- 1) Fish
- 2) Swim
- 3) Wash
- 4) Drink

**Correct Answer:** Fish

**Question 2.** Select the related word/letters/numbers from the given alternatives:

**ACEG:BDFH::IKMO: ?**

**Options:**

- 1) IJKL
- 2) JLNP
- 3) KLMN
- 4) HIJK

**Correct Answer:** JLNP

**Question 3.** Select the related word/letters/numbers from the given alternatives:

12:20::30: ?

**Options:**

- 1) 15
- 2) 35
- 3) 42
- 4) 48

**Correct Answer:** 42

**Question 4.**

For the following questions

Find the odd word/letters/number pair from the given alternatives.

(A) Neurologist (B) Dentist (C) Architect (D) Paediatrician

**Options:**

- 1) A
- 2) B
- 3) C
- 4) D

**Correct Answer:** C

**Question 5.**

For the following questions

Find the odd word/letters/number pair from the given alternatives.

**Options:**

- 1) A
- 2) B
- 3) C
- 4) D

**Correct Answer:** C

**Question 6.**

For the following questions

Find the odd word/letters/number pair from the given alternatives.

**Options:**

- 1) A
- 2) B
- 3) C
- 4) D

**Correct Answer:** A

**Question 7.** Arrange the following words as per order in the dictionary.

1. Syringe 2. Syphilis 3. Syncretism 4. Synarchy 5. Submerge

**Options:**

- 1) 4,5,2,3,1
- 2) 5,4,3,2,1
- 3) 5,3,4,1,2
- 4) 4,1,2,3,5

**Correct Answer:** 5,4,3,2,1

**Question 8.** A series is given, with one term missing. Choose the correct alternative from the given ones that will complete the series.

WYV, ? , IKH, BDA

**Options:**

- 1) OPR
- 2) ROP
- 3) PRO
- 4) OQH

**Correct Answer:** PRO

**Question 9.** Which number will complete the series?

6 , 8 , 17 , 19 , 28 , 30 , ?

**Options:**

- 1) 32
- 2) 37
- 3) 38
- 4) 39

**Correct Answer:** 39

**Question 10.** A is B's brother, C is A's mother, D is C's father, F is A's son. How is A related to F's child?

**Options:**

- 1) Aunt
- 2) Cousin
- 3) Nephew
- 4) Grandfather

**Correct Answer:** Grandfather

**Question 11.** Seven boys A,B,C,D,E,F and G are standing in a line.

- (i) G is between A and E
- (ii) F and A have one boy between them
- (iii) E and C have two boys between them
- (iv) D is immediate right of F
- (v) C and B have three boys between them

Who is second from left?

Options:

- 1) C
- 2) G
- 3) E
- 4) A

Correct Answer: E

Question 12. From the given alternative words, select the word which cannot be formed using the letters of the given word:

**MEASUREMENT**

Options:

- 1) TEAMS
- 2) MASTER
- 3) SUMMIT
- 4) SUMMER

Correct Answer: SUMMIT

Question 13. In a certain code language the word EXAMPLES is written as EMAXSEPL. How will the word BUOYANCY be written in that language?

Options:

- 1) YBANCYOU
- 2) CUOYYBAN
- 3) CUYOYBAN
- 4) CYOYBAN

Candidate Answer: [ NOT ANSWERED ]

Question 14. If P denotes multiply, T denotes subtraction, M denotes addition, B denotes division then  $28B7P8T6M4 = ?$

Options:

- 1) 28
- 2) 30
- 3) 32
- 4) 34

Correct Answer: 30

Question 15. In this question, some equations are solved on the basis of a certain system. On the same basis find out the correct answer from amongst the four alternatives for the unsolved equation.

$$7 \times 5 \times 6 = 576,$$

$$4 \times 2 \times 5 = 245,$$

$$8 \times 2 \times 5 = ?$$

Options:

1) 258

2) 285

3) 582

4) 852

Correct Answer: 285

Question 16. Find the missing term in the following question:-

|    |     |    |
|----|-----|----|
| 3  | 4   | 9  |
| 2  | 5   | 2  |
| 6  | 7   | ?  |
| 36 | 140 | 18 |

Options:

1) 1

2) 7

3) 12

4) 19

Correct Answer: 1

Question 17. Pranav went 10 Km to the North. Then he turned West and covered 10 Km. Then he turned south and covered 5 Km. Finally, he turned to the East and covered 10 Km. In which direction he is from the starting point?

Options:

1) South

2) North

3) East

4) West

**Correct Answer:** North

**Question 18.** Consider the given statement/s to be true and decide which of the given conclusions/assumptions can definitely be drawn from the given statement. **Statement:** Many books are rocks. All rocks are clips.

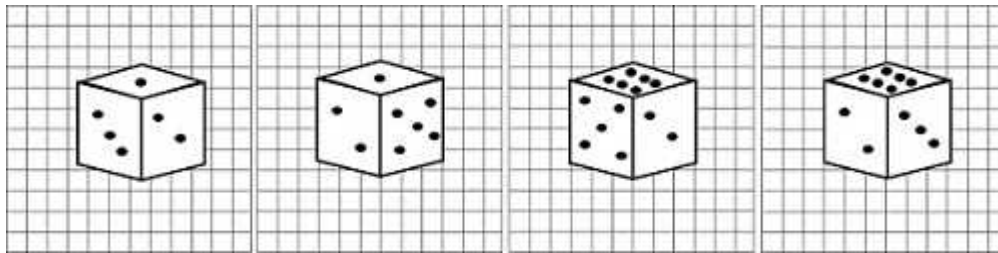
**Conclusion I:** Some books are clips. **II:** No rock is a book.

**Options:**

- 1) Only conclusion I follows
- 2) Only conclusion II follows
- 3) Both conclusion I and conclusion II follow
- 4) Neither conclusion I nor conclusion II follows

**Correct Answer:** Only conclusion I follows

**Question 19.** Four different views of a cube/dice are given as viewed from different angles. Find out the number of dots on the face opposite to the face with one dot.



**Options:**

- 1) 6
- 2) 5
- 3) 4
- 4) 3

**Correct Answer:** 6

**Question 20.** Choose from the four diagrams given below, the one that illustrates the relationship among 'Languages', 'French' and 'German'.

# SSC Constable (GD) Exam Study Kit



- ▶ 100% Written Exam Syllabus
- ▶ 700+ Pages, Printed Books
- ▶ 1500 MCQ, 8 Books
- ▶ Practice Question Papers
- ▶ 1 Year Current Affairs

**50% OFF**  
~~₹ 3,200/-~~  
**₹ 1,599/-**



 100% SAFE

for Exam Help Call Us at: +91 8800734161

IAS EXAM PORTAL

## What you will get:

- 100% Syllabus Covered
- 8 Booklets
- 700+ Pages
- Five Practice Papers
- One Year Current Affairs
- Current Affairs for Exam
- Guidance & Support from Our Experts

Price of the Kit:

~~Rs. 3,200~~

**Rs. 1,599/-**  
(Limited time Offer)

 Buy Online

Net Banking

**Order Online (100% Safe)**

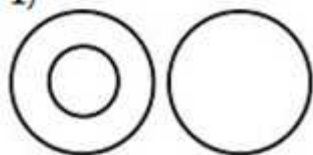
[Click here for Other Payment Options \(Cash/NEFT/etc\)](#)

**FOR MORE DETAILS CLICK HERE**

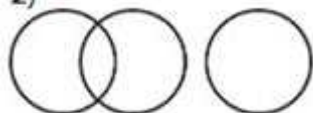
**50% OFF**

Options:

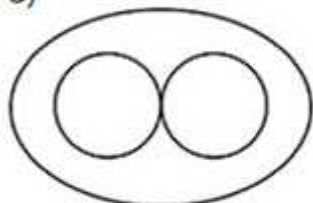
1)



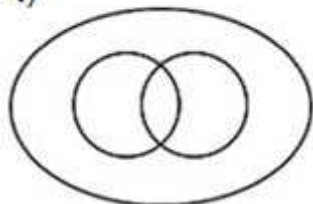
2)



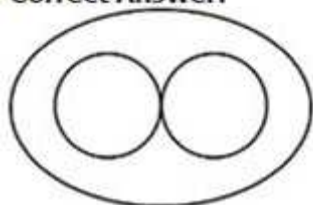
3)



4)

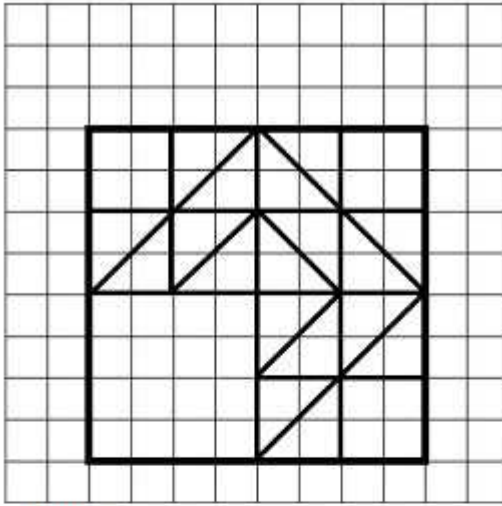


Correct Answer:



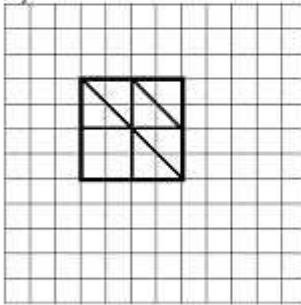
Question 21. Which answer will complete the pattern in the question figure?



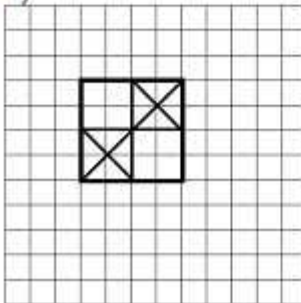


Options:

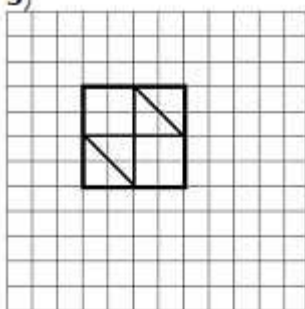
1)



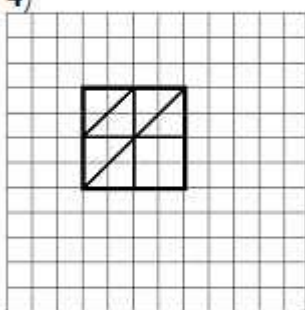
2)



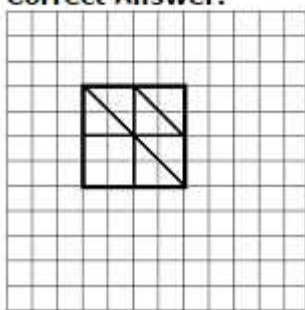
3)



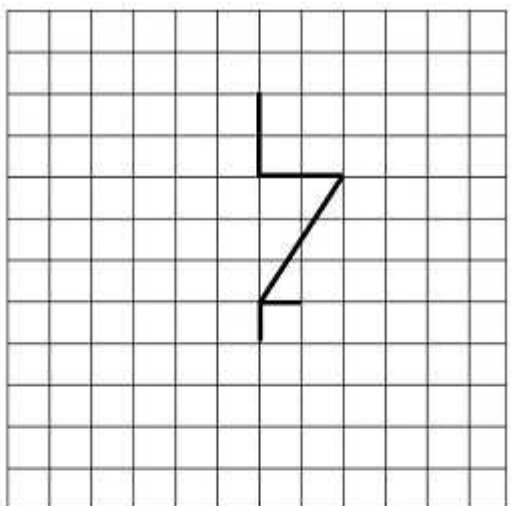
4)



**Correct Answer:**

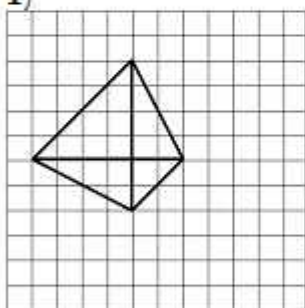


Question 22. From the given answer figures, select the one in which the question figure is hidden/embedded.

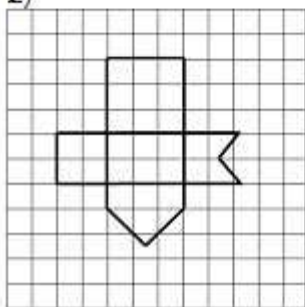


Options:

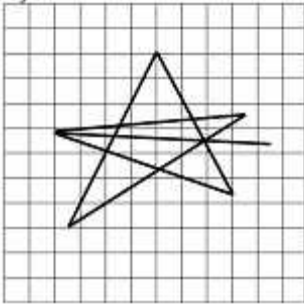
1)



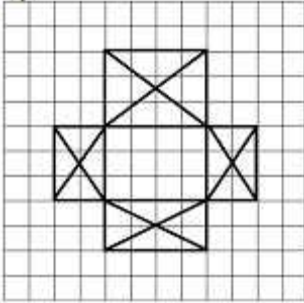
2)



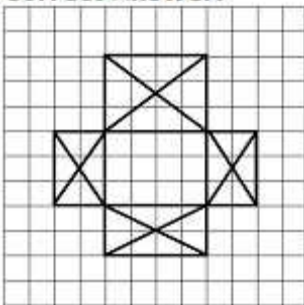
3)



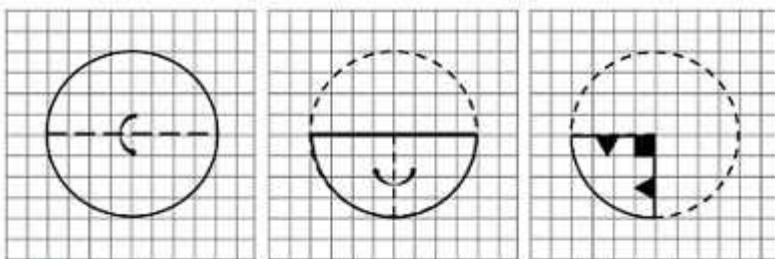
4)



**Correct Answer:**

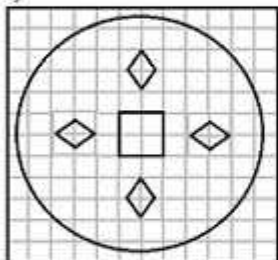


Question 23. A piece of paper is folded and cut as shown below in the question figures. From the given answer figures, indicate how it will appear when opened.

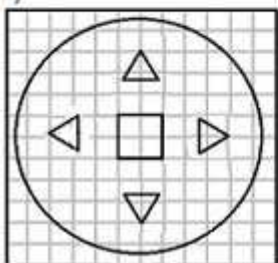


Options:

1)



2)



# SSC CGL Tier-1 Printed Study Kit



- 100% Syllabus Covered
- 12 Books , 1300+ Pages
- 5600+ MCQs
- 08 Year Solved Papers & Mock Tests (PDF Copy)
- 1 year Current Affairs (PDF Copy)

**50% OFF**

~~₹ 6,000/-~~  
**₹ 2,999/-**

**FREE SHIPPING** 

for Exam Help Call Us at: +91 8800734161

 **SSCPORTAL.IN**

## What you will get:

- 100% Syllabus Covered
- 12 Books
- 1300+ Pages
- 5600+ MCQs
- 8 Year Solved Papers (PDF Copy)
- Five Practice Papers (PDF Copy)
- One Year Current Affairs (PDF Copy)
- Guidance & Support from Our Experts

Price of the Kit:

~~Rs. 6,000~~

**Rs. 2,999/-**  
(Limited time Offer)

 **Buy Online**

**Net Banking**

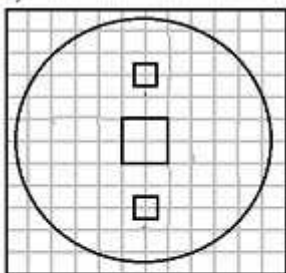
**Order Online (100% Safe)**

[Click here for Other Payment Options \(Cash/NEFT/etc\)](#)

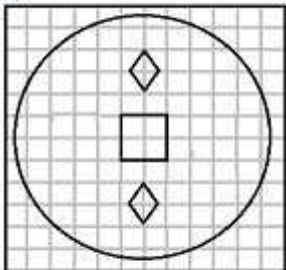
**FOR MORE DETAILS CLICK HERE**

**50% OFF**

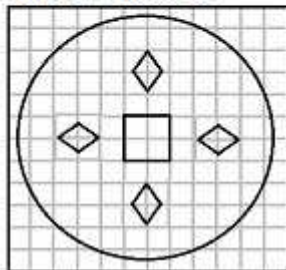
3)



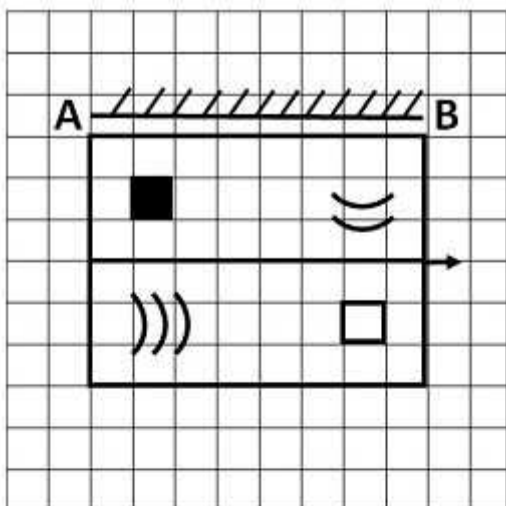
4)



**Correct Answer:**

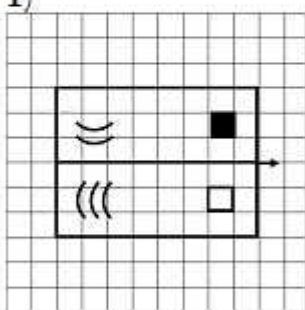


Question 24. If a mirror is placed on the line MN, then which of the answer figures is the right image of the given figure?

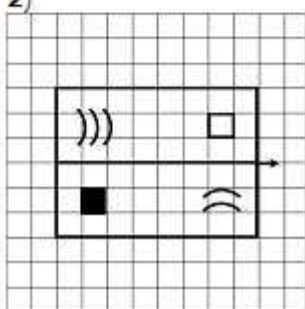


Options:

1)

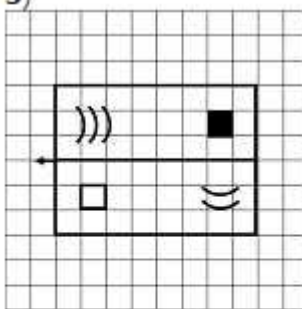


2)

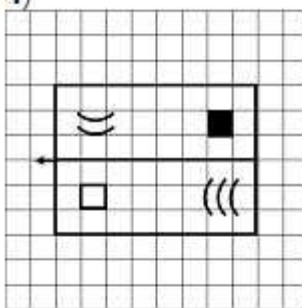
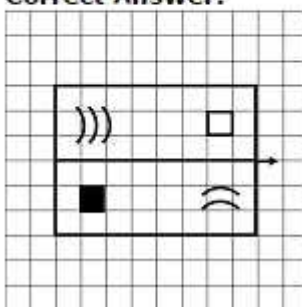




3)



4)

**Correct Answer:**

Question 25. In the question, a word is represented by only one set of numbers as given in any one of the alternatives. The sets of numbers given in the alternatives are represented by two classes of alphabets as in two matrices given below. The columns and rows of Matrix I are numbered from 0 to 4 and that of Matrix II are numbered from 5 to 9. A letter from these matrices can be represented first by its row and next by its column, e.g., O can be represented by 02,14, etc., and P can be represented by 55,67,, etc. You have to identify the set for the word 'NECK'.

| Matrix-I |   |   |   |   |   | Matrix-II |   |   |   |   |   |
|----------|---|---|---|---|---|-----------|---|---|---|---|---|
|          | 0 | 1 | 2 | 3 | 4 |           | 5 | 6 | 7 | 8 | 9 |
| 0        | L | E | O | S | C | 5         | R | K | U | N | T |
| 1        | S | C | L | E | O | 6         | N | T | R | K | U |
| 2        | E | O | S | C | L | 7         | K | U | N | T | B |
| 3        | C | L | E | O | S | 8         | T | R | K | U | N |
| 4        | O | S | C | L | E | 9         | U | N | T | R | K |

**Options:**

- 1) 96,32,34,68
- 2) 77,13,69,75
- 3) 65,21,58,99
- 4) 89,44,30,87

**Correct Answer:** 89,44,30,87



# SSC EXAMS PRINTED STUDY NOTES

|   |                         |                            |
|---|-------------------------|----------------------------|
| <a href="#">Study Material for SSC CGL (Tier-1) Examination</a>               | <a href="#">English</a> | <a href="#">CLICK HERE</a> |
| <a href="#">Study Kit for SSC CGL (Tier-2) Exam</a>                           | <a href="#">English</a> | <a href="#">CLICK HERE</a> |
| <a href="#">Study Kit for SSC CHSL (10+2) Examination</a>                     | <a href="#">English</a> | <a href="#">CLICK HERE</a> |
| <a href="#">Study Kit for SSC Stenographers (Grade 'C' &amp; 'D')</a>         | <a href="#">English</a> | <a href="#">CLICK HERE</a> |
| <a href="#">Study Kit for Multitasking (Non-Technical) - MTS</a>              | <a href="#">English</a> | <a href="#">CLICK HERE</a> |
| <a href="#">Study Kit for SSC Constables (GD) Exam</a>                        | <a href="#">English</a> | <a href="#">CLICK HERE</a> |
| <a href="#">Study Kit For SSC Sub-Inspectors in Delhi Police, CAPFs, CISF</a> | <a href="#">English</a> | <a href="#">CLICK HERE</a> |
| <a href="#">Study Kit for SSC Junior Engineer Exam (Paper-1)</a>              | <a href="#">English</a> | <a href="#">CLICK HERE</a> |
| <b>IAS EXAMS STUDY MATERIALS</b>  |                         |                            |
| <a href="#">Study Kit for IAS (Pre) GENERAL STUDIES Paper-1 (GS)</a>          | <a href="#">English</a> | <a href="#">CLICK HERE</a> |
| <a href="#">Study Kit for IAS (Pre) CSAT Paper-2(Aptitude)</a>                | <a href="#">English</a> | <a href="#">CLICK HERE</a> |
| <a href="#">सामान्य अध्ययन (GS) प्रारंभिक परीक्षा (Pre) पेपर-1</a>            | <a href="#">हिन्दी</a>  | <a href="#">CLICK HERE</a> |
| <a href="#">आई. ए. एस. (सी-सैट) प्रारंभिक परीक्षा पेपर -2</a>                 | <a href="#">हिन्दी</a>  | <a href="#">CLICK HERE</a> |
| <a href="#">Gist of NCERT Study Kit For UPSC Exams</a>                        | <a href="#">English</a> | <a href="#">CLICK HERE</a> |
| <a href="#">यूपीएससी परीक्षा के लिए एनसीईआरटी अध्ययन सामग्री</a>              | <a href="#">हिन्दी</a>  | <a href="#">CLICK HERE</a> |