

SSC CGL 2017 EXAM PAPER : Held on 09-AUG-2017
Shift-1
(Reasoning)

QID : 1 - In the following question, select the related word from the given alternatives.

Kilometre : Metre :: Tonne : ?

Options:

- 1) Litre
- 2) Kilogram
- 3) Hours
- 4) Weight

Correct Answer: Kilogram

QID : 2 - In the following question, select the related letters from the given alternatives.

AGN : IOV :: BLM : ?

Options:

- 1) JTV
- 2) KTU
- 3) JUV
- 4) TUJ

Correct Answer: JTV

QID : 3 - In the following question, select the related number from the given alternatives.

9143 : 9963 :: 6731 : ?

Options:

- 1) 1368
- 2) 5666
- 3) 8964
- 4) 9694

Correct Answer: 8964

QID : 4 - In the following question, select the odd word from the given alternatives.

Options:

- 1) Chennai
- 2) Daman
- 3) Raipur
- 4) Shimla

Correct Answer: Daman

QID : 5 - In the following question, select the odd letter from the given alternatives.

Options:

- 1) B
- 2) N
- 3) P
- 4) W

Correct Answer: W \

QID : 6 - In the follo

wing question, select the odd number from the given alternatives.

Options:

- 1) 313
- 2) 426
- 3) 925
- 4) 1034

Correct Answer: 313

QID : 7 - Arrange the given words in the sequence in which they occur in the dictionary.

1. Ball
2. Balanced
3. Balls
4. Balance
5. Balancing

Options:

- 1) 24135
- 2) 42135
- 3) 42513
- 4) 54213

Correct Answer: 42513

QID : 8 - A series is given with one term missing. Select the correct alternative from the given ones that will complete the series.

AG, LR, WC, HN, ?

Options:

- 1) QY
- 2) RX
- 3) SY
- 4) TZ

Correct Answer: SY

QID : 9 - In the following question, select the missing number from the given series.

13, 16, 11, 18, 9, 20, ?

Options:

- 1) 3
- 2) 5
- 3) 6
- 4) 7

Correct Answer: 7

QID : 10 - Punit said to a lady, "The sister of your father's wife is my aunt". How is the lady related to Punit?

SSC CGL Tier-1 Printed Study Kit



- 100% Syllabus Covered
- 12 Books , 1300+ Pages
- 5600+ MCQs
- 08 Year Solved Papers & Mock Tests (PDF Copy)
- 1 year Current Affairs (PDF Copy)

50% OFF

~~₹ 6,000/-~~
₹ 2,999/-

FREE SHIPPING

for Exam Help Call Us at: +91 8800734161

SSCPORTAL.IN

What you will get:

- 100% Syllabus Covered
- 12 Books
- 1300+ Pages
- 5600+ MCQs
- 8 Year Solved Papers (PDF Copy)
- Five Practice Papers (PDF Copy)
- One Year Current Affairs (PDF Copy)
- Guidance & Support from Our Experts

Price of the Kit:

Rs. 6,000

Rs. 2,999/-
(Limited time Offer)



Buy Online



Net Banking

Order Online (100% Safe)

[Click here for Other Payment Options \(Cash/NEFT/etc\)](#)

[FOR MORE DETAILS CLICK HERE](#)

50% OFF

Options:

- 1) Daughter
- 2) Grand Daughter
- 3) Niece
- 4) Cousin sister

Correct Answer: Cousin sister

QID : 11 - There are 45 trees in a row. The lemon tree is 20th from right end. What is the rank of lemon tree from left end?

Options:

- 1) 26
- 2) 24
- 3) 25
- 4) 27

Correct Answer: 26

QID : 12 - In the following question, from the given alternative words, select the word which cannot be formed using the letters of the given word.

UNIFORMITY

Options:

- 1) ANNUITY
- 2) FORUM
- 3) MINT
- 4) UNIFORM

Correct Answer: ANNUITY

QID : 13 - In a certain code language, "TIRED" is written as "56" and "BRAIN" is written as "44". How is "LAZY" written in that code language?

Options:

- 1) 64
- 2) 61
- 3) 58
- 4) 43

Correct Answer: 64

QID : 14 - In the following question, by using which mathematical operator will the expression become correct?

$$18 \text{ ? } 6 \text{ ? } 9 \text{ ? } 27$$

Options:

1) \times , \div and $=$

2) \div , \times and $=$

3) \times , $+$ and $=$

4) $+$, $-$ and $=$

Correct Answer: \div , \times and $=$

QID : 15 - If $18 (9) 3$ and $36 (30) 5$, then what is the value of A in $19 (A) 18$?

Options:

1) 33

2) 57

3) 75

4) 96

Correct Answer: 57

QID : 16 -

कर्मचारी चयन आयोग (CGL) परीक्षा अध्ययन सामग्री



- 100% Syllabus Covered
- 4 Books, 900+ Pages
- 2500+ MCQs
- 08 Year Solved Papers & Mock Tests (PDF Copy)
- 1 year Current Affairs (PDF Copy)

50% OFF

~~₹ 4,200/-~~
₹ 2,100/-

FREE
SHIPPING

for Exam Help Call Us at: +91 8800734161

SSCPORTAL.IN

आप क्या प्राप्त करेंगे?

- माध्यम: हिन्दी
- 100% पाठ्यक्रम
- कुल 4 पुस्तिकायें, 900 से अधिक पृष्ठ
- 2,500 से अधिक वस्तुनिष्ठ प्रश्न (MCQ)
- 8 Year Solved Papers (PDF Copy)
- Five Practice Papers (PDF Copy)
- हमारे विशेषज्ञों द्वारा मार्गदर्शन और सहायता

Price of the Kit:

Rs. 4,200

Rs. 2,100/-

(Limited time Offer)



Buy Online



Net Banking

Order Online (100% Safe)

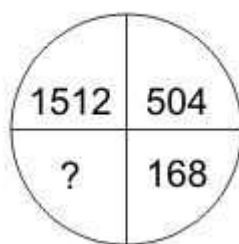
[Click here for Other Payment Options \(Cash/NEFT/etc\)](#)

FOR MORE DETAILS CLICK HERE



In the following question, select the number which can be placed at the sign of question mark (?) from the given alternatives.

निम्नलिखित प्रश्न में दिए गए विकल्पों में से प्रश्न चिह्न (?) के स्थान पर आने वाली संख्या को चुनिए।



Options:

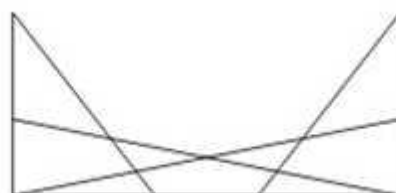
- 1) 53
- 2) 56
- 3) 59
- 4) 66

Correct Answer: 56

QID : 17 -

How many triangles are there in the given figure?

नीचे दी गई आकृति में कितने त्रिभुज हैं?



Options:

- 1) 14

2) 15

3) 17

4) 18

Correct Answer: 17

QID : 18 - In the following question below are given some statements followed by some conclusions. Taking the given statements to be true even if they seem to be at variance from commonly known facts, read all the conclusions and then decide which of the given conclusion logically follows the given statements.

Statements:

I. Some pens are pencils.

II. All pencils are erasers.

Conclusions:

I. Some pencils are not pens.

II. Some erasers are not pens.

Options:

1) Only conclusion (I) follows.

2) Only conclusion (II) follows.

3) Neither conclusion (I) nor conclusion (II) follows.

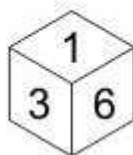
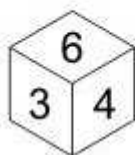
4) Both conclusions follow.

Correct Answer: Neither conclusion (I) nor conclusion (II) follows.

QID : 19 -

Three positions of a cube are shown below. What will come opposite to face containing '4'?

नीचे एक घन की तीन अवस्थाएँ दर्शायी गयी हैं। अंक '4' के विपरीत फलक पर कौन सा अंक आयेगा?



SSC CHSL (10+2) Printed Study Kit



- 100% CHSL Exam Syllabus Covered
- 5 Books, 1000+ Pages
- 4500+ MCQs
- Solved Papers & Mock Tests (PDF Copy)
- 1 Year Current Affairs (PDF Copy)

50% OFF
~~₹ 4,000/-~~
₹ 1,999/-

FREE SHIPPING

for Exam Help Call Us at: +91 8800734161

SSCPORTAL.IN

What you will get:

- 100% CHSL Exam Syllabus Covered
- 5 Booklets
- More Than 1000+ Pages
- 4500+ MCQs
- Previous Solved Papers
- Current Affairs for Exam
- Guidance & Support from Our Experts

Price of the Kit:

Rs. 4,000

Rs. 1,999/-
(Limited time Offer)



Net Banking

Order Online (100% Safe)

[Click here for Other Payment Options \(Cash/NEFT/etc\)](#)

[FOR MORE DETAILS CLICK HERE](#)



Options:

- 1) 1
- 2) 2
- 3) 4
- 4) 5

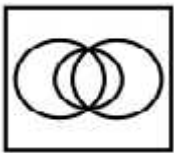
Correct Answer: 1

QID : 20 - Identify the diagram that best represents the relationship among the given classes.

Music Instrument, Piano, Guitar

Options:

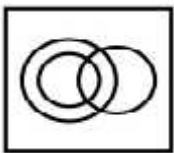
1)



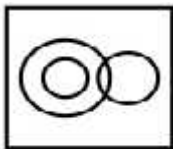
2)



3)



4)




Correct Answer:

QID : 21 -

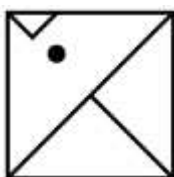
Which answer figure will complete the pattern in the question figure?

कौन सी उत्तर आकृति प्रश्न आकृति के प्रतिरूप को पूरा करेगी?

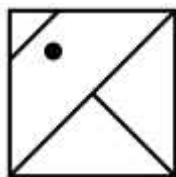


Options:

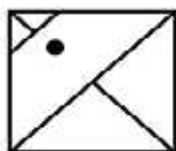
1)



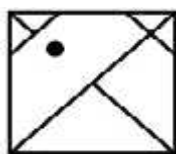
2)



3)



4)



Correct Answer:

QID : 22 -

SSC CHSL(10+2) परीक्षा अध्ययन सामग्री



- 100% CHSL Exam Syllabus Covered
- 5 Books, 900+ Pages
- 2500+ MCQs
- 1 Year Current Affairs (PDF Copy)
- Support & Guidance

50% OFF
₹ 4,000/-
₹ **1,999/-**

FREE SHIPPING

for Exam Help Call Us at: +91 8800734161

SSCPORTAL.IN

आप क्या प्राप्त करेंगे?

- माध्यम: हिन्दी
- 100 प्रतिशत पाठ्यक्रम
- 900 से अधिक पृष्ठ
- 2500 से अधिक वस्तुनिष्ठ प्रश्न
- कुल 5 पुस्तिकाएँ
- अध्यायवार M.C.Q
- गणित एवं तार्किक क्षमता को हल करने की सरल विधि
- 5 अभ्यास प्रश्न पत्र (PDF Copy)
- हमारे विशेषज्ञों द्वारा मार्गदर्शन और सहायता

Price of the Kit:

Rs. 4,200

Rs. 1,999/-

(Limited time Offer)

 **Buy Online**

Net Banking

Order Online (100% Safe)

[Click here for Other Payment Options \(Cash/NEFT/etc\)](#)

FOR MORE DETAILS CLICK HERE

50% OFF

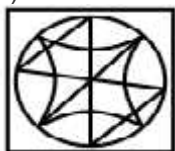
From the given answer figures, select the one in which the question figure is hidden/embedded.

दी गई उत्तर आकृतियों में से उस उत्तर आकृति को चुनिए जिस में प्रश्न आकृति निहित है।



Options:

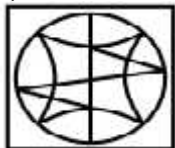
1)



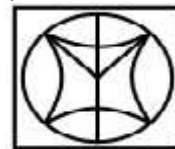
2)



3)



4)



Correct Answer:

QID : 23 -

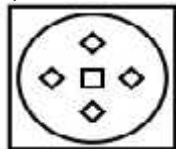
A piece of paper is folded and punched as shown below in the question figures. From the given answer figures, indicate how it will appear when opened?

नीचे के प्रश्न आकृतियों में दिखाए अनुसार कागज को मोड़कर छेदने तथा खोलने के बाद वह किस उत्तर आकृति जैसा दिखाई देगा?

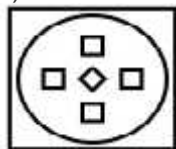


Options:

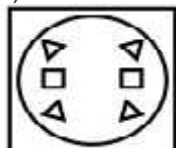
1)



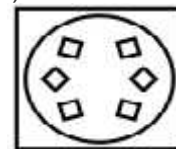
2)



3)



4)



Correct Answer:

SSC Constable (GD) Exam Study Kit



- ▶ 100% Written Exam Syllabus
- ▶ 700+ Pages, Printed Books
- ▶ 1500 MCQ, 8 Books
- ▶ Practice Question Papers
- ▶ 1 Year Current Affairs

50% OFF
~~₹ 3,200/-~~
₹ 1599/-



 **100% SAFE**

for Exam Help Call Us at: **+91 8800734161**

IAS EXAM PORTAL

What you will get:

- 100% Syllabus Covered
- 8 Booklets
- 700+ Pages
- Five Practice Papers
- One Year Current Affairs
- Current Affairs for Exam
- Guidance & Support from Our Experts

Price of the Kit:

~~Rs. 3,200~~

Rs. 1,599/-
(Limited time Offer)



Net Banking

Order Online (100% Safe)

[Click here for Other Payment Options \(Cash/NEFT/etc\)](#)

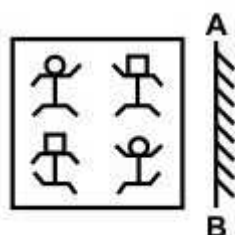
FOR MORE DETAILS CLICK HERE



QID : 24 -

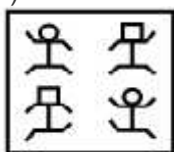
If a mirror is placed on the line AB, then which of the answer figure is the right image of the given figure?

यदि एक दर्पण को AB रेखा पर रखा जाए, तो दी गई उत्तर आकृतियों में से कौन सी आकृति प्रश्न आकृति की सही प्रतिबिम्ब होगी?

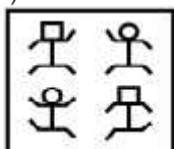


Options:

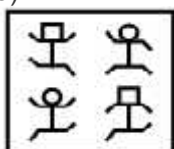
1)



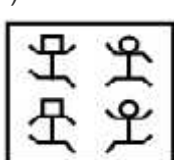
2)



3)



4)



Correct Answer:

QID : 25 -

A word is represented by only one set of numbers as given in any one of the alternatives. The sets of numbers given in the alternatives are represented by two classes of alphabets as shown in the given two matrices. The columns and rows of **Matrix-I** are numbered from 0 to 4 and that of **Matrix-II** are numbered from 5 to 9. A letter from these matrices can be represented first by its row and next by its column, for example, 'K' can be represented by **10, 31**, etc., and 'M' can be represented by **76, 87**, etc. Similarly, you have to identify the set for the word "**SCAM**".

एक शब्द केवल एक संख्या-समूह द्वारा दर्शाया गया है, जैसा कि विकल्पों में से किसी एक में दिया गया है। विकल्पों में दिए गए संख्या-समूह अक्षरों के दो वर्गों द्वारा दर्शाए गए हैं, जैसा कि नीचे दिए गए दो आव्यूहों में है। **आव्यूह-I** के स्तम्भ और पंक्ति की संख्या 0 से 4 दी गई है, और **आव्यूह-II** की 5 से 9। इन आव्यूहों से एक अक्षर को पहले उसकी पंक्ति और बाद में स्तम्भ संख्या द्वारा दर्शाया गया है। उदाहरण के लिए 'K' को **10, 31**, आदि द्वारा दर्शाया जा सकता है तथा 'M' को **76, 87**, आदि द्वारा दर्शाया जा सकता है। इसी तरह से आपको प्रश्न में दिए गए शब्द "**SCAM**" के लिए समूह को पहचानना है।

Matrix-I
आव्यूह-I

	0	1	2	3	4
0	S	P	K	N	C
1	K	S	C	P	N
2	P	C	N	S	K
3	N	K	S	C	P
4	C	N	P	K	S

Matrix-II
आव्यूह-II

	5	6	7	8	9
5	I	R	A	J	M
6	A	J	I	M	R
7	J	M	R	A	I
8	R	A	M	I	J
9	M	I	J	R	A

Options:

- 1) 00, 13, 57, 76
- 2) 11, 04, 86, 59
- 3) 23, 22, 99, 95

Study Kit for SSC Stenographers (Grade 'C' & 'D') Examination (Paper - 1)



- Medium: English
- 100% Syllabus Covered
- 3000 + MCQs
- 700+ Pages

**SPECIAL
OFFER**

Only

**MRP ₹ 3000/-
Offer ₹ 1499/-**

[Click Here for More Details](#)

What you will get:

- 100% Syllabus Covered
- 6 Booklets
- 700+ Pages
- 3000+ MCQs
- Five Practice Papers
- One Year Current Affairs
- Guidance & Support from Our Experts

Price of the Kit:

~~Rs. 3,000~~

Rs. 1,499/-
(Limited time Offer)



Net Banking

FOR MORE DETAILS CLICK HERE

Order Online (100% Safe)

[Click here for Other Payment Options \(Cash/NEFT/etc\)](#)

**50%
OFF**

4) 32, 40, 66, 68

Correct Answer: 11, 04, 86, 59



SSC EXAMS

PRINTED STUDY NOTES

Study Material for SSC CGL (Tier-1) Examination	English	CLICK HERE
Study Kit for SSC CGL (Tier-2) Exam	English	CLICK HERE
Study Kit for SSC CHSL (10+2) Examination	English	CLICK HERE
Study Kit for SSC Stenographers (Grade 'C' & 'D')	English	CLICK HERE
Study Kit for Multitasking (Non-Technical) - MTS	English	CLICK HERE
Study Kit for SSC Constables (GD) Exam	English	CLICK HERE
Study Kit For SSC Sub-Inspectors in Delhi Police, CAPFs, CISF	English	CLICK HERE
Study Kit for SSC Junior Engineer Exam (Paper-1)	English	CLICK HERE
IAS EXAMS STUDY MATERIALS		
Study Kit for IAS (Pre) GENERAL STUDIES Paper-1 (GS)	English	CLICK HERE
Study Kit for IAS (Pre) CSAT Paper-2(Aptitude)	English	CLICK HERE
सामान्य अध्ययन (GS) प्रारंभिक परीक्षा (Pre) पेपर-1	हिन्दी	CLICK HERE
आई. ए. एस. (सी-सैट) प्रारंभिक परीक्षा पेपर -2	हिन्दी	CLICK HERE
Gist of NCERT Study Kit For UPSC Exams	English	CLICK HERE
यूपीएससी परीक्षा के लिए एनसीईआरटी अध्ययन सामग्री	हिन्दी	CLICK HERE