

## SSC CGL 2017 EXAM PAPER : Held on 11-AUG-2017 Shift-1 (Reasoning)

---

**QID : 1** - In the following question, select the related word from the given alternatives.

Hockey : Stick :: Boxing : ?

**Options:**

- 1) Bat
- 2) Ball
- 3) Sword
- 4) Gloves

**Correct Answer:** Gloves

**QID : 2** - In the following question, select the related letters from the given alternatives.

FS : LY :: IV : ?

**Options:**

- 1) GT
- 2) HS
- 3) IR
- 4) TZ

**Correct Answer:** GT

**QID : 3** - In the following question, select the related number group from the given alternatives.

19 : 367 :: ? : ?

**Options:**

- 1) 21 : 447
- 2) 22 : 491
- 3) 29 : 850
- 4) 31 : 963

**Correct Answer:** 21 : 447

**QID : 4** - In the following question, select the odd word from the given alternatives.

**Options:**

- 1) Sea
- 2) Ocean
- 3) Lake
- 4) Marsh

**Correct Answer:** Marsh

**QID : 5** - In the following question, select the odd letter group from the given alternatives.

**Options:**

- 1) AJ
- 2) EN
- 3) NW
- 4) PW

**Correct Answer:** PW

**QID : 6** - In the following question, select the odd number from the given alternatives.

**Options:**

- 1) 170
- 2) 290
- 3) 360
- 4) 530

**Correct Answer:** 360

**QID : 7** - Arrange the given words in the sequence in which they occur in the dictionary.

1. Effacers
2. Effacing
3. Effaceable
4. Effacements
5. Effacement

**Options:**

- 1) 34125
- 2) 35412
- 3) 43152
- 4) 43215

**Correct Answer:** 35412

**QID : 8** - A series is given with one term missing. Select the correct alternative from the given ones that will complete the series.

C11, V17, O23, ?

**Options:**

- 1) H30
- 2) H31
- 3) I29
- 4) I31

**Correct Answer:** H31

**QID : 9** - In the following question, select the missing number from the given series.

19, 26, 45, 71, 116, ?

**Options:**

- 1) 166
- 2) 172
- 3) 184
- 4) 187

**Correct Answer:** 187

**QID : 10** - Abhinav travels 10 km north then turns left. Then he travels 6 km and turns right and

# SSC Constable (GD) Exam Study Kit



- ▶ 100% Written Exam Syllabus
- ▶ 700+ Pages, Printed Books
- ▶ 1500 MCQ, 8 Books
- ▶ Practice Question Papers
- ▶ 1 Year Current Affairs

**50% OFF**  
~~₹ 3,200/-~~  
**₹ 1599/-**



 **100% SAFE**

for Exam Help Call Us at: **+91 8800734161**

IAS EXAM PORTAL

## What you will get:

- 100% Syllabus Covered
- 8 Booklets
- 700+ Pages
- Five Practice Papers
- One Year Current Affairs
- Current Affairs for Exam
- Guidance & Support from Our Experts

Price of the Kit:

~~Rs. 3,200~~

**Rs. 1,599/-**  
(Limited time Offer)



Net Banking

**Order Online (100% Safe)**

[Click here for Other Payment Options \(Cash/NEFT/etc\)](#)

**FOR MORE DETAILS CLICK HERE**



cover another 7 km. He finally turns to right and travels another 6 km. How far (in km) is he from the point of starting his journey?

**Options:**

- 1) 14
- 2) 16
- 3) 15
- 4) 17

**Correct Answer:** 17

**QID : 11** - In the English alphabet, which letter is 13th from right end?

**Options:**

- 1) L
- 2) M
- 3) N
- 4) O

**Correct Answer:** N

**QID : 12** - In the following question, from the given alternative words, select the word which cannot be formed using the letters of the given word.

HANDSOME

**Options:**

- 1) HATS
- 2) HOME
- 3) NAME
- 4) SAND

**Correct Answer:** HATS

**QID : 13** - In a certain code language, "ACCOUNT" is written as "DFFRXQW". How is "MATHS" written in that code language?

**Options:**

- 1) PDWKV
- 2) PKLKP
- 3) PEWLU

4) PWDVK

**Correct Answer:** PDWKV

**QID : 14** - If "-" means "divided by", "+" means "multiplied by", "÷" means "added to", "x" means "subtracted from", then

$$11 \div 6 - 2 + 5 \times 3 = ?$$

**Options:**

- 1) 17
- 2) 21
- 3) 23
- 4) 26

**Correct Answer:** 23

**QID : 15** - If  $3 \# 6 * 9 = 45$  and  $9 \# 8 * 7 = 105$ , then what is the value of  $5 * 6 \# 3 = ?$

**Options:**

- 1) 14
- 2) 68
- 3) 86
- 4) 90

**Correct Answer:** 68

**QID : 16** -

In the following question, select the number which can be placed at the sign of question mark (?) from the given alternatives.

निम्नलिखित प्रश्न में दिए गए विकल्पों में से प्रश्न चिह्न (?) के स्थान पर आने वाली संख्या को चुनिए।

336	170	748
523	78	349
431	?	328

**Options:**

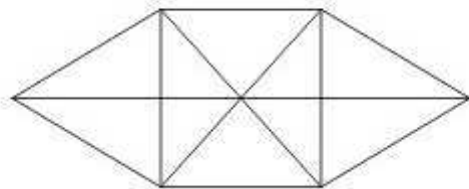
- 1) 33
- 2) 34
- 3) 36
- 4) 37

**Correct Answer:** 36

**QID : 17 -**

How many triangles are there in the given figure?

नीचे दी गई आकृति में कितने त्रिभुज हैं?



**Options:**

- 1) 16
- 2) 20
- 3) 22
- 4) 24

**Correct Answer:** 22

**QID : 18 -** In the following question below are given some statements followed by some conclusions. Taking the given statements to be true even if they seem to be at variance from commonly known facts, read all the conclusions and then decide which of the given conclusion logically follows the given statements.

Statements:

- I. All bags are tables.
- II. No table is red.

# SSC CGL Tier-1 Printed Study Kit



- 100% Syllabus Covered
- 12 Books , 1300+ Pages
- 5600+ MCQs
- 08 Year Solved Papers & Mock Tests (PDF Copy)
- 1 year Current Affairs (PDF Copy)

**50% OFF**

~~₹ 6,000/-~~  
**₹ 2,999/-**

**FREE SHIPPING**

for Exam Help Call Us at: +91 8800734161

**SSCPORTAL.IN**

## What you will get:

- 100% Syllabus Covered
- 12 Books
- 1300+ Pages
- 5600+ MCQs
- 8 Year Solved Papers (PDF Copy)
- Five Practice Papers (PDF Copy)
- One Year Current Affairs (PDF Copy)
- Guidance & Support from Our Experts

Price of the Kit:

**Rs. 6,000**

**Rs. 2,999/-**  
(Limited time Offer)



**Buy Online**



**Net Banking**

**Order Online (100% Safe)**

**[Click here for Other Payment Options \(Cash/NEFT/etc\)](#)**

**[FOR MORE DETAILS CLICK HERE](#)**

**50% OFF**



Conclusions:

- I. Some bags are red.
- II. All bags are red.

**Options:**

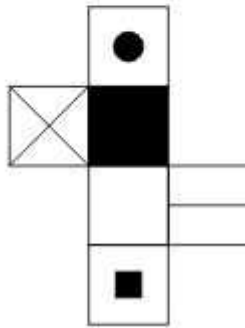
- 1) Only conclusion (I) follows.
- 2) Only conclusion (II) follows.
- 3) Neither conclusion (I) nor conclusion (II) follows.
- 4) Both conclusions follow.

**Correct Answer:** Neither conclusion (I) nor conclusion (II) follows.

**QID : 19 -**

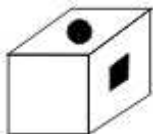
From the given options, which figure can be formed by folding the figure given in the question?

निम्नलिखित विकल्पों में से कौन सी उत्तर आकृति प्रश्न में दी गई आकृति को मोड़कर बनाई जा सकती है?



**Options:**

1)



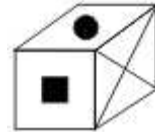
2)



3)



4)



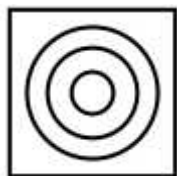
**Correct Answer:**

**QID : 20** - Identify the diagram that best represents the relationship among the given classes.

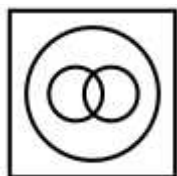
Bull, Animal, Carnivorous

**Options:**

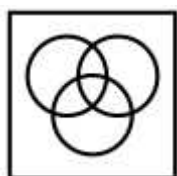
1)



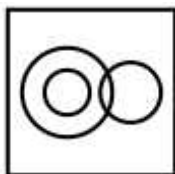
2)



3)



4)




Correct Answer:

QID : 21 -

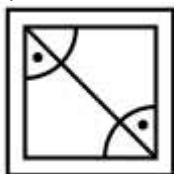
Which answer figure will complete the pattern in the question figure?

कौन सी उत्तर आकृति प्रश्न आकृति के प्रतिरूप को पूरा करेगी?



Options:

1)



2)



3)

# कर्मचारी चयन आयोग (CGL) परीक्षा अध्ययन सामग्री



- 100% Syllabus Covered
- 4 Books, 900+ Pages
- 2500+ MCQs
- 08 Year Solved Papers & Mock Tests (PDF Copy)
- 1 year Current Affairs (PDF Copy)

**50% OFF**

~~₹ 4,200/-~~  
**₹ 2,100/-**

**FREE**  
SHIPPING

for Exam Help Call Us at: +91 8800734161

**SSCPORTAL.IN**

## आप क्या प्राप्त करेंगे?

- माध्यम: हिन्दी
- 100% पाठ्यक्रम
- कुल 4 पुस्तिकायें, 900 से अधिक पृष्ठ
- 2,500 से अधिक वस्तुनिष्ठ प्रश्न (MCQ)
- 8 Year Solved Papers (PDF Copy)
- Five Practice Papers (PDF Copy)
- हमारे विशेषज्ञों द्वारा मार्गदर्शन और सहायता

Price of the Kit:

**Rs. 4,200**

**Rs. 2,100/-**

(Limited time Offer)



**Buy Online**



Net Banking

**Order Online (100% Safe)**

[Click here for Other Payment Options \(Cash/NEFT/etc\)](#)

**FOR MORE DETAILS CLICK HERE**





4)

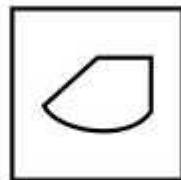


Correct Answer:

QID : 22 -

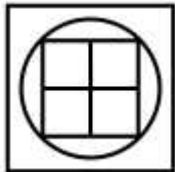
From the given answer figures, select the one in which the question figure is hidden/embedded.

दी गई उत्तर आकृतियों में से उस उत्तर आकृति को चुनिए जिस में प्रश्न आकृति निहित है।

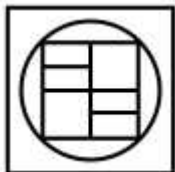


Options:

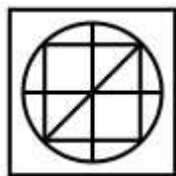
1)



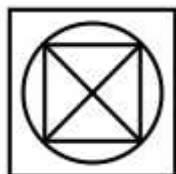
2)



3)



4)

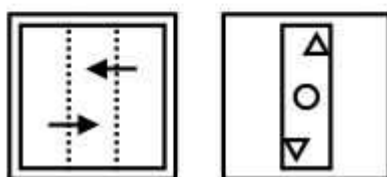


Correct Answer:

QID : 23 -

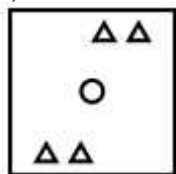
A piece of paper is folded and punched as shown below in the question figures. From the given answer figures, indicate how it will appear when opened?

नीचे के प्रश्न आकृतियों में दिखाए अनुसार कागज को मोड़कर छेदने तथा खोलने के बाद वह किस उत्तर आकृति जैसा दिखाई देगा?

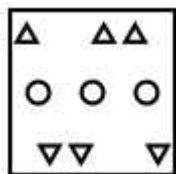


Options:

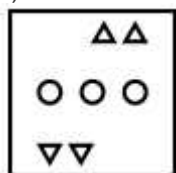
1)



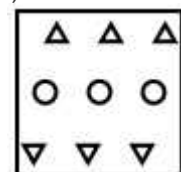
2)



3)



4)

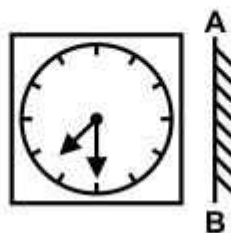


Correct Answer:

QID : 24 -

If a mirror is placed on the line AB, then which of the answer figure is the right image of the given figure?

यदि एक दर्पण को AB रेखा पर रखा जाए, तो दी गई उत्तर आकृतियों में से कौन सी आकृति प्रश्न आकृति की सही प्रतिबिम्ब होगी?



Options:

1)

## Study Kit for SSC Stenographers (Grade 'C' & 'D') Examination (Paper - 1)



- Medium: English
- 100% Syllabus Covered
- 3000 + MCQs
- 700+ Pages

**SPECIAL  
OFFER**

**Only**

**MRP ₹ 3000/-  
Offer ₹ 1499/-**

[Click Here for More Details](#)

### What you will get:

- 100% Syllabus Covered
- 6 Booklets
- 700+ Pages
- 3000+ MCQs
- Five Practice Papers
- One Year Current Affairs
- Guidance & Support from Our Experts

Price of the Kit:

~~Rs. 3,000~~

**Rs. 1,499/-**  
(Limited time Offer)



Net Banking


**FOR MORE DETAILS CLICK HERE**

**Order Online (100% Safe)**


[Click here for Other Payment Options \(Cash/NEFT/etc\)](#)

**50%  
OFF**

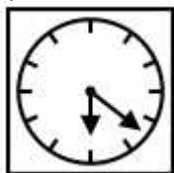




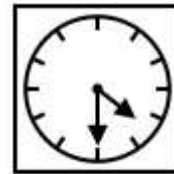
2)



3)



4)



Correct Answer:

QID : 25 -

A word is represented by only one set of numbers as given in any one of the alternatives. The sets of numbers given in the alternatives are represented by two classes of alphabets as shown in the given two matrices. The columns and rows of **Matrix-I** are numbered from 0 to 4 and that of **Matrix-II** are numbered from 5 to 9. A letter from these matrices can be represented first by its row and next by its column, for example, 'P' can be represented by **02**, **10**, etc., and 'G' can be represented by **66**, **98**, etc. Similarly, you have to identify the set for the word "TRAIL".

एक शब्द केवल एक संख्या-समूह द्वारा दर्शाया गया है, जैसा कि विकल्पों में से किसी एक में दिया गया है। विकल्पों में दिए गए संख्या-समूह अक्षरों के दो वर्गों द्वारा दर्शाए गए हैं, जैसा कि नीचे दिए गए दो आव्यूहों में है। **आव्यूह-I** के स्तम्भ और पंक्ति की संख्या 0 से 4 दी गई है, और **आव्यूह-II** की 5 से 9। इन आव्यूहों से एक अक्षर को पहले उसकी पंक्ति और बाद में स्तम्भ संख्या द्वारा दर्शाया गया है। उदाहरण के लिए 'P' को **02**, **10**, आदि द्वारा दर्शाया जा सकता है तथा 'G' को **66**, **98**, आदि द्वारा दर्शाया जा सकता है। इसी तरह से आपको प्रश्न में दिए गए शब्द "TRAIL" के लिए समूह को पहचानना है।

Matrix-I						Matrix-II					
आव्यूह-I						आव्यूह-II					
	0	1	2	3	4		5	6	7	8	9
0	I	T	P	R	U	5	G	A	L	H	S
1	P	R	U	I	T	6	H	G	S	A	L
2	T	I	R	U	P	7	A	L	G	S	H
3	R	U	T	P	I	8	S	H	A	L	G
4	U	P	I	T	R	9	L	S	H	G	A

Options:

- 1) 01, 03, 75, 00, 68
- 2) 14, 30, 68, 13, 58
- 3) 20, 44, 99, 21, 96
- 4) 43, 11, 56, 34, 88

**Correct Answer:** 43, 11, 56, 34, 88



# SSC EXAMS

## PRINTED STUDY NOTES

<a href="#">Study Material for SSC CGL (Tier-1) Examination</a>	<a href="#">English</a>	<a href="#">CLICK HERE</a>
<a href="#">Study Kit for SSC CGL (Tier-2) Exam</a>	<a href="#">English</a>	<a href="#">CLICK HERE</a>
<a href="#">Study Kit for SSC CHSL (10+2) Examination</a>	<a href="#">English</a>	<a href="#">CLICK HERE</a>
<a href="#">Study Kit for SSC Stenographers (Grade 'C' &amp; 'D')</a>	<a href="#">English</a>	<a href="#">CLICK HERE</a>
<a href="#">Study Kit for Multitasking (Non-Technical) - MTS</a>	<a href="#">English</a>	<a href="#">CLICK HERE</a>
<a href="#">Study Kit for SSC Constables (GD) Exam</a>	<a href="#">English</a>	<a href="#">CLICK HERE</a>
<a href="#">Study Kit For SSC Sub-Inspectors in Delhi Police, CAPFs, CISF</a>	<a href="#">English</a>	<a href="#">CLICK HERE</a>
<a href="#">Study Kit for SSC Junior Engineer Exam (Paper-1)</a>	<a href="#">English</a>	<a href="#">CLICK HERE</a>
<b>IAS EXAMS STUDY MATERIALS</b>		
<a href="#">Study Kit for IAS (Pre) GENERAL STUDIES Paper-1 (GS)</a>	<a href="#">English</a>	<a href="#">CLICK HERE</a>
<a href="#">Study Kit for IAS (Pre) CSAT Paper-2(Aptitude)</a>	<a href="#">English</a>	<a href="#">CLICK HERE</a>
<a href="#">सामान्य अध्ययन (GS) प्रारंभिक परीक्षा (Pre) पेपर-1</a>	<a href="#">हिन्दी</a>	<a href="#">CLICK HERE</a>
<a href="#">आई. ए. एस. (सी-सैट) प्रारंभिक परीक्षा पेपर -2</a>	<a href="#">हिन्दी</a>	<a href="#">CLICK HERE</a>
<a href="#">Gist of NCERT Study Kit For UPSC Exams</a>	<a href="#">English</a>	<a href="#">CLICK HERE</a>
<a href="#">यूपीएससी परीक्षा के लिए एनसीईआरटी अध्ययन सामग्री</a>	<a href="#">हिन्दी</a>	<a href="#">CLICK HERE</a>